

CHAPTER 6 APPLICATIONS OF DEFINITE INTEGRALS

6.1 VOLUMES USING CROSS-SECTIONS

$$1. A(x) = \frac{(\text{diagonal})^2}{2} = \frac{(\sqrt{x} - (-\sqrt{x}))^2}{2} = 2x; a = 0, b = 4;$$

$$V = \int_a^b A(x) dx = \int_0^4 2x dx = [x^2]_0^4 = 16$$

$$2. A(x) = \frac{\pi(\text{diameter})^2}{4} = \frac{\pi[(2-x^2)-x^2]^2}{4} = \frac{\pi[2(1-x^2)]^2}{4} = \pi(1-2x^2+x^4); a = -1, b = 1;$$

$$V = \int_a^b A(x) dx = \int_{-1}^1 \pi(1-2x^2+x^4) dx = \pi \left[x - \frac{2}{3}x^3 + \frac{x^5}{5} \right]_{-1}^1 = 2\pi \left(1 - \frac{2}{3} + \frac{1}{5} \right) = \frac{16\pi}{15}$$

$$3. A(x) = (\text{edge})^2 = \left[\sqrt{1-x^2} - (-\sqrt{1-x^2}) \right]^2 = (2\sqrt{1-x^2})^2 = 4(1-x^2); a = -1, b = 1;$$

$$V = \int_a^b A(x) dx = \int_{-1}^1 4(1-x^2) dx = 4 \left[x - \frac{x^3}{3} \right]_{-1}^1 = 8 \left(1 - \frac{1}{3} \right) = \frac{16}{3}$$

$$4. A(x) = \frac{(\text{diagonal})^2}{2} = \frac{[\sqrt{1-x^2} - (-\sqrt{1-x^2})]^2}{2} = \frac{(2\sqrt{1-x^2})^2}{2} = 2(1-x^2); a = -1, b = 1;$$

$$V = \int_a^b A(x) dx = 2 \int_{-1}^1 (1-x^2) dx = 2 \left[x - \frac{x^3}{3} \right]_{-1}^1 = 4 \left(1 - \frac{1}{3} \right) = \frac{8}{3}$$

$$5. (a) \text{ STEP 1) } A(x) = \frac{1}{2}(\text{side}) \cdot (\text{side}) \cdot \left(\sin \frac{\pi}{3} \right) = \frac{1}{2} \cdot (2\sqrt{\sin x}) \cdot (2\sqrt{\sin x}) \left(\sin \frac{\pi}{3} \right) = \sqrt{3} \sin x$$

$$\text{STEP 2) } a = 0, b = \pi$$

$$\text{STEP 3) } V = \int_a^b A(x) dx = \sqrt{3} \int_0^\pi \sin x dx = [-\sqrt{3} \cos x]_0^\pi = \sqrt{3}(1+1) = 2\sqrt{3}$$

$$(b) \text{ STEP 1) } A(x) = (\text{side})^2 = (2\sqrt{\sin x})^2 = 4 \sin x$$

$$\text{STEP 2) } a = 0, b = \pi$$

$$\text{STEP 3) } V = \int_a^b A(x) dx = \int_0^\pi 4 \sin x dx = [-4 \cos x]_0^\pi = 8$$

$$6. (a) \text{ STEP 1) } A(x) = \frac{\pi(\text{diameter})^2}{4} = \frac{\pi}{4}(\sec x - \tan x)^2 = \frac{\pi}{4}(\sec^2 x + \tan^2 x - 2 \sec x \tan x) \\ = \frac{\pi}{4} \left[\sec^2 x + (\sec^2 x - 1) - 2 \frac{\sin x}{\cos^2 x} \right]$$

$$\text{STEP 2) } a = -\frac{\pi}{3}, b = \frac{\pi}{3}$$

$$\text{STEP 3) } V = \int_a^b A(x) dx = \int_{-\pi/3}^{\pi/3} \frac{\pi}{4} (2 \sec^2 x - 1 - \frac{2 \sin x}{\cos^2 x}) dx = \frac{\pi}{4} \left[2 \tan x - x + 2 \left(-\frac{1}{\cos x} \right) \right]_{-\pi/3}^{\pi/3} \\ = \frac{\pi}{4} \left[2\sqrt{3} - \frac{\pi}{3} + 2 \left(-\frac{1}{\frac{1}{2}} \right) - \left(-2\sqrt{3} + \frac{\pi}{3} + 2 \left(-\frac{1}{\frac{1}{2}} \right) \right) \right] = \frac{\pi}{4} \left(4\sqrt{3} - \frac{2\pi}{3} \right)$$

$$(b) \text{ STEP 1) } A(x) = (\text{edge})^2 = (\sec x - \tan x)^2 = (2 \sec^2 x - 1 - 2 \frac{\sin x}{\cos^2 x})$$

$$\text{STEP 2) } a = -\frac{\pi}{3}, b = \frac{\pi}{3}$$

$$\text{STEP 3) } V = \int_a^b A(x) dx = \int_{-\pi/3}^{\pi/3} (2 \sec^2 x - 1 - \frac{2 \sin x}{\cos^2 x}) dx = 2 \left(2\sqrt{3} - \frac{\pi}{3} \right) = 4\sqrt{3} - \frac{2\pi}{3}$$

$$7. (a) \text{ STEP 1) } A(x) = (\text{length}) \cdot (\text{height}) = (6-3x) \cdot (10) = 60-30x$$

$$\text{STEP 2) } a = 0, b = 2$$

$$\text{STEP 3) } V = \int_a^b A(x) dx = \int_0^2 (60-30x) dx = [60x-15x^2]_0^2 = (120-60)-0=60$$

(b) STEP 1) $A(x) = (\text{length}) \cdot (\text{height}) = (6 - 3x) \cdot \left(\frac{20 - 2(6 - 3x)}{2}\right) = (6 - 3x)(4 + 3x) = 24 + 6x - 9x^2$

STEP 2) $a = 0, b = 2$

STEP 3) $V = \int_a^b A(x) dx = \int_0^2 (24 + 6x - 9x^2) dx = [24x + 3x^2 - 3x^3]_0^2 = (48 + 12 - 24) - 0 = 36$

8. (a) STEP 1) $A(x) = \frac{1}{2}(\text{base}) \cdot (\text{height}) = \left(\sqrt{x} - \frac{x}{2}\right) \cdot (6) = 6\sqrt{x} - 3x$

STEP 2) $a = 0, b = 4$

STEP 3) $V = \int_a^b A(x) dx = \int_0^4 (6x^{1/2} - 3x) dx = [4x^{3/2} - \frac{3}{2}x^2]_0^4 = (32 - 24) - 0 = 8$

(b) STEP 1) $A(x) = \frac{1}{2} \cdot \pi \left(\frac{\text{diameter}}{2}\right)^2 = \frac{1}{2} \cdot \pi \left(\frac{\sqrt{x} - \frac{x}{2}}{2}\right)^2 = \frac{\pi}{2} \cdot \frac{x - x^{3/2} + \frac{1}{4}x^2}{4} = \frac{\pi}{8} \left(x - x^{3/2} + \frac{1}{4}x^2\right)$

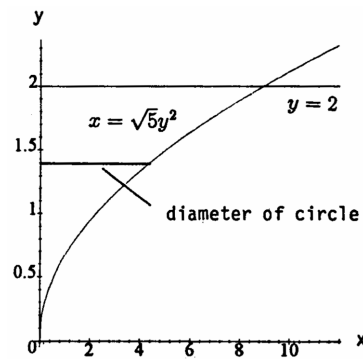
STEP 2) $a = 0, b = 4$

STEP 3) $V = \int_a^b A(x) dx = \frac{\pi}{8} \int_0^4 \left(x - x^{3/2} + \frac{1}{4}x^2\right) dx = \left[\frac{1}{2}x^2 - \frac{2}{5}x^{5/2} + \frac{1}{12}x^3\right]_0^4 = \frac{\pi}{8} \left(8 - \frac{64}{5} + \frac{16}{3}\right) - \frac{\pi}{8}(0) = \frac{\pi}{15}$

9. $A(y) = \frac{\pi}{4}(\text{diameter})^2 = \frac{\pi}{4}(\sqrt{5y^2} - 0)^2 = \frac{5\pi}{4}y^4$;

$c = 0, d = 2$; $V = \int_c^d A(y) dy = \int_0^2 \frac{5\pi}{4}y^4 dy$

$= \left[\left(\frac{5\pi}{4}\right)\left(\frac{y^5}{5}\right)\right]_0^2 = \frac{\pi}{4}(2^5 - 0) = 8\pi$



10. $A(y) = \frac{1}{2}(\text{leg})(\text{leg}) = \frac{1}{2}[\sqrt{1 - y^2} - (-\sqrt{1 - y^2})]^2 = \frac{1}{2}(2\sqrt{1 - y^2})^2 = 2(1 - y^2)$; $c = -1, d = 1$;

$V = \int_c^d A(y) dy = \int_{-1}^1 2(1 - y^2) dy = 2\left[y - \frac{y^3}{3}\right]_{-1}^1 = 4\left(1 - \frac{1}{3}\right) = \frac{8}{3}$

11. The slices perpendicular to the edge labeled 5 are triangles, and by similar triangles we have $\frac{b}{h} = \frac{4}{3} \Rightarrow h = \frac{3}{4}b$. The equation of the line through (5, 0) and (0, 4) is $y = -\frac{4}{5}x + 4$, thus the length of the base $= -\frac{4}{5}x + 4$ and the height $= \frac{3}{4}(-\frac{4}{5}x + 4) = -\frac{3}{5}x + 3$. Thus $A(x) = \frac{1}{2}(\text{base}) \cdot (\text{height}) = \frac{1}{2}\left(-\frac{4}{5}x + 4\right) \cdot \left(-\frac{3}{5}x + 3\right) = \frac{6}{25}x^2 - \frac{12}{5}x + 6$ and $V = \int_a^b A(x) dx = \int_0^5 \left(\frac{6}{25}x^2 - \frac{12}{5}x + 6\right) dx = \left[\frac{2}{25}x^3 - \frac{6}{5}x^2 + 6x\right]_0^5 = (10 - 30 + 30) - 0 = 10$

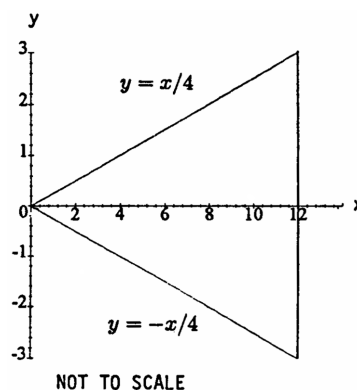
12. The slices parallel to the base are squares. The cross section of the pyramid is a triangle, and by similar triangles we have $\frac{b}{h} = \frac{3}{5} \Rightarrow b = \frac{3}{5}h$. Thus $A(y) = (\text{base})^2 = \left(\frac{3}{5}y\right)^2 = \frac{9}{25}y^2 \Rightarrow V = \int_c^d A(y) dy = \int_0^5 \frac{9}{25}y^2 dy = \left[\frac{3}{25}y^3\right]_0^5 = 15 - 0 = 15$

13. (a) It follows from Cavalieri's Principle that the volume of a column is the same as the volume of a right prism with a square base of side length s and altitude h . Thus, STEP 1) $A(x) = (\text{side length})^2 = s^2$;

STEP 2) $a = 0, b = h$; STEP 3) $V = \int_a^b A(x) dx = \int_0^h s^2 dx = s^2h$

(b) From Cavalieri's Principle we conclude that the volume of the column is the same as the volume of the prism described above, regardless of the number of turns $\Rightarrow V = s^2h$

14. 1) The solid and the cone have the same altitude of 12.
 2) The cross sections of the solid are disks of diameter $x - \left(\frac{x}{2}\right) = \frac{x}{2}$. If we place the vertex of the cone at the origin of the coordinate system and make its axis of symmetry coincide with the x-axis then the cone's cross sections will be circular disks of diameter $\frac{x}{4} - \left(-\frac{x}{4}\right) = \frac{x}{2}$ (see accompanying figure).
 3) The solid and the cone have equal altitudes and identical parallel cross sections. From Cavalieri's Principle we conclude that the solid and the cone have the same volume.



$$15. R(x) = y = 1 - \frac{x}{2} \Rightarrow V = \int_0^2 \pi[R(x)]^2 dx = \pi \int_0^2 \left(1 - \frac{x}{2}\right)^2 dx = \pi \int_0^2 \left(1 - x + \frac{x^2}{4}\right) dx = \pi \left[x - \frac{x^2}{2} + \frac{x^3}{12}\right]_0^2$$

$$= \pi \left(2 - \frac{4}{2} + \frac{8}{12}\right) = \frac{2\pi}{3}$$

$$16. R(y) = x = \frac{3y}{2} \Rightarrow V = \int_0^2 \pi[R(y)]^2 dy = \pi \int_0^2 \left(\frac{3y}{2}\right)^2 dy = \pi \int_0^2 \frac{9}{4} y^2 dy = \pi \left[\frac{3}{4} y^3\right]_0^2 = \pi \cdot \frac{3}{4} \cdot 8 = 6\pi$$

$$17. R(y) = \tan\left(\frac{\pi}{4}y\right); u = \frac{\pi}{4}y \Rightarrow du = \frac{\pi}{4}dy \Rightarrow 4du = \pi dy; y = 0 \Rightarrow u = 0, y = 1 \Rightarrow u = \frac{\pi}{4};$$

$$V = \int_0^1 \pi[R(y)]^2 dy = \pi \int_0^1 \left[\tan\left(\frac{\pi}{4}y\right)\right]^2 dy = 4 \int_0^{\pi/4} \tan^2 u du = 4 \int_0^{\pi/4} (-1 + \sec^2 u) du = 4[-u + \tan u]_0^{\pi/4}$$

$$= 4\left(-\frac{\pi}{4} + 1 - 0\right) = 4 - \pi$$

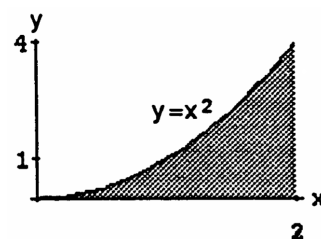
$$18. R(x) = \sin x \cos x; R(x) = 0 \Rightarrow a = 0 \text{ and } b = \frac{\pi}{2} \text{ are the limits of integration; } V = \int_0^{\pi/2} \pi[R(x)]^2 dx$$

$$= \pi \int_0^{\pi/2} (\sin x \cos x)^2 dx = \pi \int_0^{\pi/2} \frac{(\sin 2x)^2}{4} dx; [u = 2x \Rightarrow du = 2 dx \Rightarrow \frac{du}{8} = \frac{dx}{4}; x = 0 \Rightarrow u = 0,$$

$$x = \frac{\pi}{2} \Rightarrow u = \pi] \rightarrow V = \pi \int_0^{\pi} \frac{1}{8} \sin^2 u du = \frac{\pi}{8} \left[\frac{u}{2} - \frac{1}{4} \sin 2u\right]_0^{\pi} = \frac{\pi}{8} \left[\left(\frac{\pi}{2} - 0\right) - 0\right] = \frac{\pi^2}{16}$$

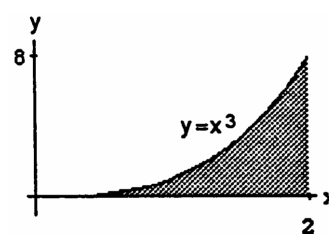
$$19. R(x) = x^2 \Rightarrow V = \int_0^2 \pi[R(x)]^2 dx = \pi \int_0^2 (x^2)^2 dx$$

$$= \pi \int_0^2 x^4 dx = \pi \left[\frac{x^5}{5}\right]_0^2 = \frac{32\pi}{5}$$

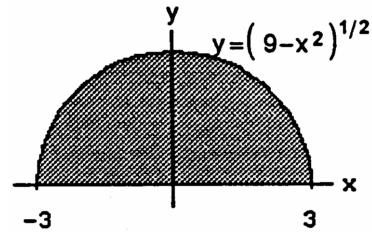


$$20. R(x) = x^3 \Rightarrow V = \int_0^2 \pi[R(x)]^2 dx = \pi \int_0^2 (x^3)^2 dx$$

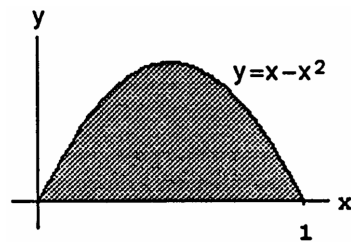
$$= \pi \int_0^2 x^6 dx = \pi \left[\frac{x^7}{7}\right]_0^2 = \frac{128\pi}{7}$$



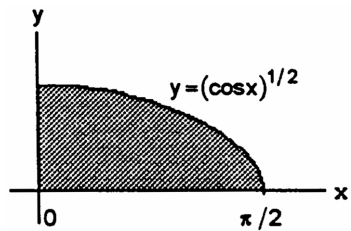
$$\begin{aligned}
 21. \quad R(x) &= \sqrt{9-x^2} \Rightarrow V = \int_{-3}^3 \pi[R(x)]^2 dx = \pi \int_{-3}^3 (9-x^2) dx \\
 &= \pi \left[9x - \frac{x^3}{3} \right]_{-3}^3 = 2\pi \left[9(3) - \frac{27}{3} \right] = 2 \cdot \pi \cdot 18 = 36\pi
 \end{aligned}$$



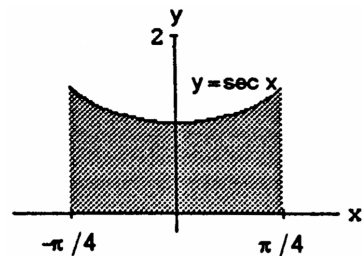
$$\begin{aligned}
 22. \quad R(x) &= x - x^2 \Rightarrow V = \int_0^1 \pi[R(x)]^2 dx = \pi \int_0^1 (x - x^2)^2 dx \\
 &= \pi \int_0^1 (x^2 - 2x^3 + x^4) dx = \pi \left[\frac{x^3}{3} - \frac{2x^4}{4} + \frac{x^5}{5} \right]_0^1 \\
 &= \pi \left(\frac{1}{3} - \frac{1}{2} + \frac{1}{5} \right) = \frac{\pi}{30} (10 - 15 + 6) = \frac{\pi}{30}
 \end{aligned}$$



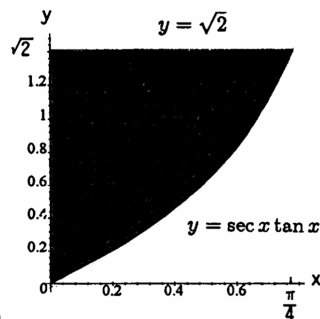
$$\begin{aligned}
 23. \quad R(x) &= \sqrt{\cos x} \Rightarrow V = \int_0^{\pi/2} \pi[R(x)]^2 dx = \pi \int_0^{\pi/2} \cos x dx \\
 &= \pi [\sin x]_0^{\pi/2} = \pi(1 - 0) = \pi
 \end{aligned}$$



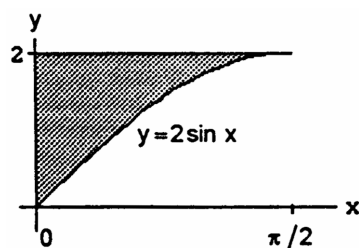
$$\begin{aligned}
 24. \quad R(x) &= \sec x \Rightarrow V = \int_{-\pi/4}^{\pi/4} \pi[R(x)]^2 dx = \pi \int_{-\pi/4}^{\pi/4} \sec^2 x dx \\
 &= \pi [\tan x]_{-\pi/4}^{\pi/4} = \pi[1 - (-1)] = 2\pi
 \end{aligned}$$



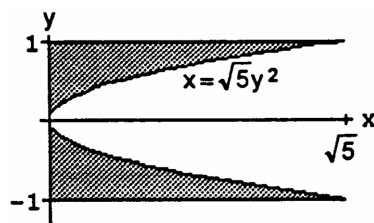
$$\begin{aligned}
 25. \quad R(x) &= \sqrt{2} - \sec x \tan x \Rightarrow V = \int_0^{\pi/4} \pi[R(x)]^2 dx \\
 &= \pi \int_0^{\pi/4} (\sqrt{2} - \sec x \tan x)^2 dx \\
 &= \pi \int_0^{\pi/4} (2 - 2\sqrt{2} \sec x \tan x + \sec^2 x \tan^2 x) dx \\
 &= \pi \left(\int_0^{\pi/4} 2 dx - 2\sqrt{2} \int_0^{\pi/4} \sec x \tan x dx + \int_0^{\pi/4} (\tan x)^2 \sec^2 x dx \right) \\
 &= \pi \left([2x]_0^{\pi/4} - 2\sqrt{2} [\sec x]_0^{\pi/4} + \left[\frac{\tan^3 x}{3} \right]_0^{\pi/4} \right) \\
 &= \pi \left(\left(\frac{\pi}{2} - 0 \right) - 2\sqrt{2} (\sqrt{2} - 1) + \frac{1}{3} (1^3 - 0) \right) = \pi \left(\frac{\pi}{2} + 2\sqrt{2} - \frac{11}{3} \right)
 \end{aligned}$$



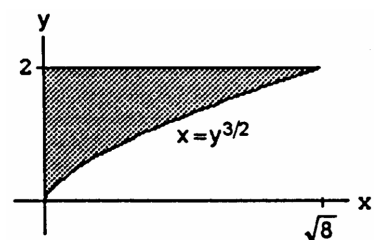
$$\begin{aligned}
 26. \quad R(x) &= 2 - 2 \sin x = 2(1 - \sin x) \Rightarrow V = \int_0^{\pi/2} \pi[R(x)]^2 dx \\
 &= \pi \int_0^{\pi/2} 4(1 - \sin x)^2 dx = 4\pi \int_0^{\pi/2} (1 + \sin^2 x - 2 \sin x) dx \\
 &= 4\pi \int_0^{\pi/2} \left[1 + \frac{1}{2}(1 - \cos 2x) - 2 \sin x\right] dx \\
 &= 4\pi \int_0^{\pi/2} \left(\frac{3}{2} - \frac{\cos 2x}{2} - 2 \sin x\right) dx \\
 &= 4\pi \left[\frac{3}{2}x - \frac{\sin 2x}{4} + 2 \cos x\right]_0^{\pi/2} \\
 &= 4\pi \left[\left(\frac{3\pi}{4} - 0 + 0\right) - (0 - 0 + 2)\right] = \pi(3\pi - 8)
 \end{aligned}$$



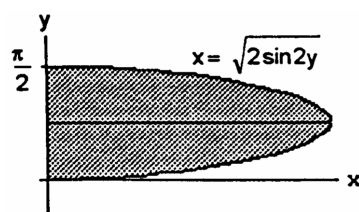
$$\begin{aligned}
 27. \quad R(y) &= \sqrt{5}y^2 \Rightarrow V = \int_{-1}^1 \pi[R(y)]^2 dy = \pi \int_{-1}^1 5y^4 dy \\
 &= \pi [y^5]_{-1}^1 = \pi[1 - (-1)] = 2\pi
 \end{aligned}$$



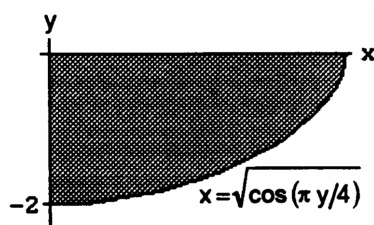
$$\begin{aligned}
 28. \quad R(y) &= y^{3/2} \Rightarrow V = \int_0^2 \pi[R(y)]^2 dy = \pi \int_0^2 y^3 dy \\
 &= \pi \left[\frac{y^4}{4}\right]_0^2 = 4\pi
 \end{aligned}$$



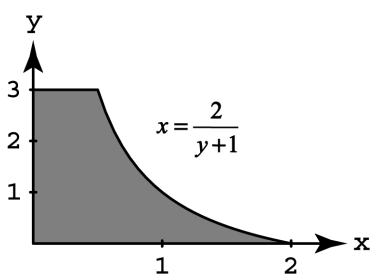
$$\begin{aligned}
 29. \quad R(y) &= \sqrt{2 \sin 2y} \Rightarrow V = \int_0^{\pi/2} \pi[R(y)]^2 dy \\
 &= \pi \int_0^{\pi/2} 2 \sin 2y dy = \pi [-\cos 2y]_0^{\pi/2} \\
 &= \pi[1 - (-1)] = 2\pi
 \end{aligned}$$



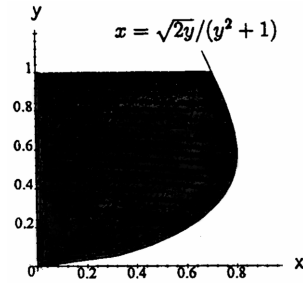
$$\begin{aligned}
 30. \quad R(y) &= \sqrt{\cos \frac{\pi y}{4}} \Rightarrow V = \int_{-2}^0 \pi[R(y)]^2 dy \\
 &= \pi \int_{-2}^0 \cos \left(\frac{\pi y}{4}\right) dy = 4 \left[\sin \frac{\pi y}{4}\right]_{-2}^0 = 4[0 - (-1)] = 4
 \end{aligned}$$



$$\begin{aligned}
 31. \quad R(y) &= \frac{2}{y+1} \Rightarrow V = \int_0^3 \pi[R(y)]^2 dy = 4\pi \int_0^3 \frac{1}{(y+1)^2} dy \\
 &= 4\pi \left[-\frac{1}{y+1}\right]_0^3 = 4\pi \left[-\frac{1}{4} - (-1)\right] = 3\pi
 \end{aligned}$$



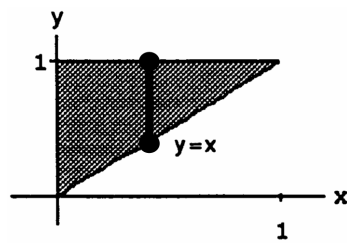
$$\begin{aligned}
 32. \quad R(y) &= \frac{\sqrt{2y}}{y^2+1} \Rightarrow V = \int_0^1 \pi [R(y)]^2 dy = \pi \int_0^1 2y (y^2+1)^{-2} dy; \\
 [u &= y^2+1 \Rightarrow du = 2y dy; y=0 \Rightarrow u=1, y=1 \Rightarrow u=2] \\
 \rightarrow V &= \pi \int_1^2 u^{-2} du = \pi \left[-\frac{1}{u} \right]_1^2 = \pi \left[-\frac{1}{2} - (-1) \right] = \frac{\pi}{2}
 \end{aligned}$$



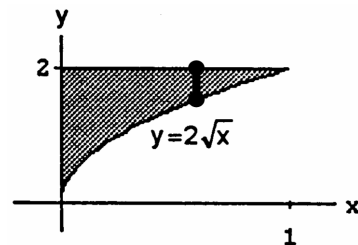
$$\begin{aligned}
 33. \quad \text{For the sketch given, } a &= -\frac{\pi}{2}, b = \frac{\pi}{2}; R(x) = 1, r(x) = \sqrt{\cos x}; V = \int_a^b \pi ([R(x)]^2 - [r(x)]^2) dx \\
 &= \int_{-\pi/2}^{\pi/2} \pi (1 - \cos x) dx = 2\pi \int_0^{\pi/2} (1 - \cos x) dx = 2\pi [x - \sin x]_0^{\pi/2} = 2\pi \left(\frac{\pi}{2} - 1 \right) = \pi^2 - 2\pi
 \end{aligned}$$

$$\begin{aligned}
 34. \quad \text{For the sketch given, } c &= 0, d = \frac{\pi}{4}; R(y) = 1, r(y) = \tan y; V = \int_c^d \pi ([R(y)]^2 - [r(y)]^2) dy \\
 &= \pi \int_0^{\pi/4} (1 - \tan^2 y) dy = \pi \int_0^{\pi/4} (2 - \sec^2 y) dy = \pi [2y - \tan y]_0^{\pi/4} = \pi \left(\frac{\pi}{2} - 1 \right) = \frac{\pi^2}{2} - \pi
 \end{aligned}$$

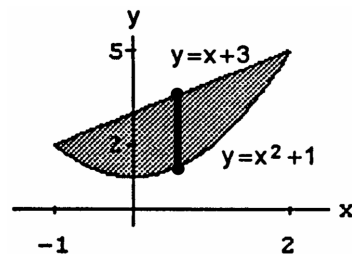
$$\begin{aligned}
 35. \quad r(x) &= x \text{ and } R(x) = 1 \Rightarrow V = \int_0^1 \pi ([R(x)]^2 - [r(x)]^2) dx \\
 &= \int_0^1 \pi (1 - x^2) dx = \pi \left[x - \frac{x^3}{3} \right]_0^1 = \pi \left[\left(1 - \frac{1}{3} \right) - 0 \right] = \frac{2\pi}{3}
 \end{aligned}$$



$$\begin{aligned}
 36. \quad r(x) &= 2\sqrt{x} \text{ and } R(x) = 2 \Rightarrow V = \int_0^1 \pi ([R(x)]^2 - [r(x)]^2) dx \\
 &= \pi \int_0^1 (4 - 4x) dx = 4\pi \left[x - \frac{x^2}{2} \right]_0^1 = 4\pi \left(1 - \frac{1}{2} \right) = 2\pi
 \end{aligned}$$

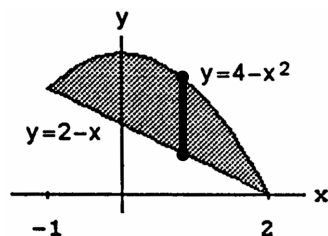


$$\begin{aligned}
 37. \quad r(x) &= x^2 + 1 \text{ and } R(x) = x + 3 \\
 \Rightarrow V &= \int_{-1}^2 \pi ([R(x)]^2 - [r(x)]^2) dx \\
 &= \pi \int_{-1}^2 [(x+3)^2 - (x^2+1)^2] dx \\
 &= \pi \int_{-1}^2 [(x^2+6x+9) - (x^4+2x^2+1)] dx \\
 &= \pi \int_{-1}^2 (-x^4 - x^2 + 6x + 8) dx \\
 &= \pi \left[-\frac{x^5}{5} - \frac{x^3}{3} + \frac{6x^2}{2} + 8x \right]_{-1}^2 \\
 &= \pi \left[\left(-\frac{32}{5} - \frac{8}{3} + \frac{24}{2} + 16 \right) - \left(\frac{1}{5} + \frac{1}{3} + \frac{6}{2} - 8 \right) \right] = \pi \left(-\frac{33}{5} - 3 + 28 - 3 + 8 \right) = \pi \left(\frac{5 \cdot 30 - 33}{5} \right) = \frac{117\pi}{5}
 \end{aligned}$$



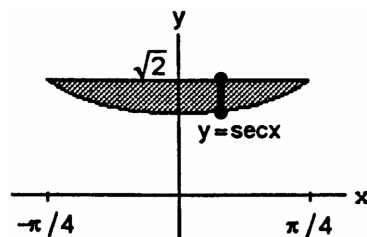
38. $r(x) = 2 - x$ and $R(x) = 4 - x^2$

$$\begin{aligned} \Rightarrow V &= \int_{-1}^2 \pi ([R(x)]^2 - [r(x)]^2) dx \\ &= \pi \int_{-1}^2 [(4 - x^2)^2 - (2 - x)^2] dx \\ &= \pi \int_{-1}^2 [(16 - 8x^2 + x^4) - (4 - 4x + x^2)] dx \\ &= \pi \int_{-1}^2 (12 + 4x - 9x^2 + x^4) dx \\ &= \pi \left[12x + 2x^2 - 3x^3 + \frac{x^5}{5} \right]_{-1}^2 \\ &= \pi \left[(24 + 8 - 24 + \frac{32}{5}) - (-12 + 2 + 3 - \frac{1}{5}) \right] = \pi \left(15 + \frac{33}{5} \right) = \frac{108\pi}{5} \end{aligned}$$



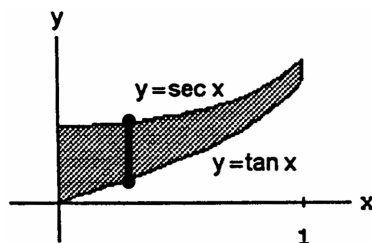
39. $r(x) = \sec x$ and $R(x) = \sqrt{2}$

$$\begin{aligned} \Rightarrow V &= \int_{-\pi/4}^{\pi/4} \pi ([R(x)]^2 - [r(x)]^2) dx \\ &= \pi \int_{-\pi/4}^{\pi/4} (2 - \sec^2 x) dx = \pi [2x - \tan x]_{-\pi/4}^{\pi/4} \\ &= \pi \left[\left(\frac{\pi}{2} - 1 \right) - \left(-\frac{\pi}{2} + 1 \right) \right] = \pi(\pi - 2) \end{aligned}$$



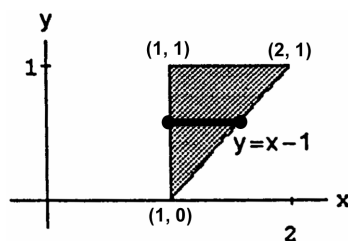
40. $R(x) = \sec x$ and $r(x) = \tan x$

$$\begin{aligned} \Rightarrow V &= \int_0^1 \pi ([R(x)]^2 - [r(x)]^2) dx \\ &= \pi \int_0^1 (\sec^2 x - \tan^2 x) dx = \pi \int_0^1 1 dx = \pi [x]_0^1 = \pi \end{aligned}$$



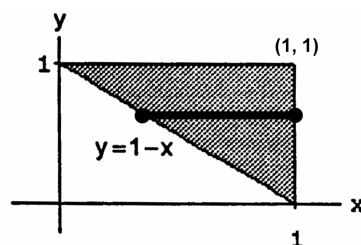
41. $r(y) = 1$ and $R(y) = 1 + y$

$$\begin{aligned} \Rightarrow V &= \int_0^1 \pi ([R(y)]^2 - [r(y)]^2) dy \\ &= \pi \int_0^1 [(1 + y)^2 - 1] dy = \pi \int_0^1 (1 + 2y + y^2 - 1) dy \\ &= \pi \int_0^1 (2y + y^2) dy = \pi \left[y^2 + \frac{y^3}{3} \right]_0^1 = \pi \left(1 + \frac{1}{3} \right) = \frac{4\pi}{3} \end{aligned}$$



42. $R(y) = 1$ and $r(y) = 1 - y \Rightarrow V = \int_0^1 \pi ([R(y)]^2 - [r(y)]^2) dy$

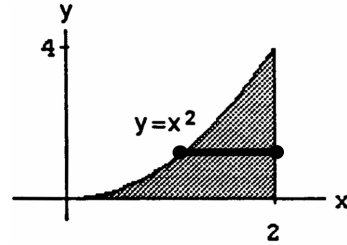
$$\begin{aligned} &= \pi \int_0^1 [1 - (1 - y)^2] dy = \pi \int_0^1 [1 - (1 - 2y + y^2)] dy \\ &= \pi \int_0^1 (2y - y^2) dy = \pi \left[y^2 - \frac{y^3}{3} \right]_0^1 = \pi \left(1 - \frac{1}{3} \right) = \frac{2\pi}{3} \end{aligned}$$



43. $R(y) = 2$ and $r(y) = \sqrt{y}$

$$\Rightarrow V = \int_0^4 \pi ([R(y)]^2 - [r(y)]^2) dy$$

$$= \pi \int_0^4 (4 - y) dy = \pi \left[4y - \frac{y^2}{2} \right]_0^4 = \pi(16 - 8) = 8\pi$$

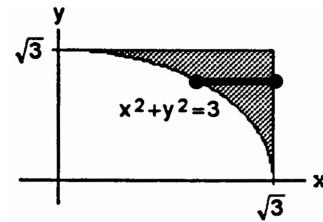


44. $R(y) = \sqrt{3}$ and $r(y) = \sqrt{3 - y^2}$

$$\Rightarrow V = \int_0^{\sqrt{3}} \pi ([R(y)]^2 - [r(y)]^2) dy$$

$$= \pi \int_0^{\sqrt{3}} [3 - (3 - y^2)] dy = \pi \int_0^{\sqrt{3}} y^2 dy$$

$$= \pi \left[\frac{y^3}{3} \right]_0^{\sqrt{3}} = \pi \sqrt{3}$$



45. $R(y) = 2$ and $r(y) = 1 + \sqrt{y}$

$$\Rightarrow V = \int_0^1 \pi ([R(y)]^2 - [r(y)]^2) dy$$

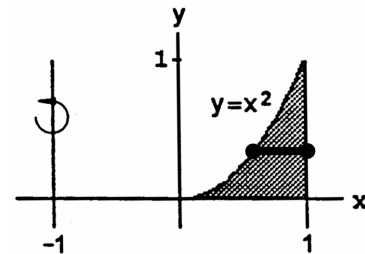
$$= \pi \int_0^1 [4 - (1 + \sqrt{y})^2] dy$$

$$= \pi \int_0^1 (4 - 1 - 2\sqrt{y} - y) dy$$

$$= \pi \int_0^1 (3 - 2\sqrt{y} - y) dy$$

$$= \pi \left[3y - \frac{4}{3}y^{3/2} - \frac{y^2}{2} \right]_0^1$$

$$= \pi \left(3 - \frac{4}{3} - \frac{1}{2} \right) = \pi \left(\frac{18-8-3}{6} \right) = \frac{7\pi}{6}$$



46. $R(y) = 2 - y^{1/3}$ and $r(y) = 1$

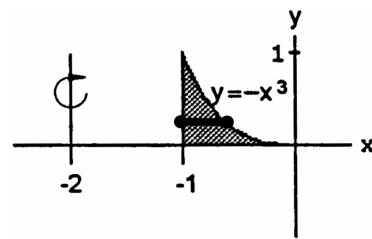
$$\Rightarrow V = \int_0^1 \pi ([R(y)]^2 - [r(y)]^2) dy$$

$$= \pi \int_0^1 [(2 - y^{1/3})^2 - 1] dy$$

$$= \pi \int_0^1 (4 - 4y^{1/3} + y^{2/3} - 1) dy$$

$$= \pi \int_0^1 (3 - 4y^{1/3} + y^{2/3}) dy$$

$$= \pi \left[3y - 3y^{4/3} + \frac{3y^{5/3}}{5} \right]_0^1 = \pi \left(3 - 3 + \frac{3}{5} \right) = \frac{3\pi}{5}$$



47. (a) $r(x) = \sqrt{x}$ and $R(x) = 2$

$$\Rightarrow V = \int_0^4 \pi ([R(x)]^2 - [r(x)]^2) dx$$

$$= \pi \int_0^4 (4 - x) dx = \pi \left[4x - \frac{x^2}{2} \right]_0^4 = \pi(16 - 8) = 8\pi$$

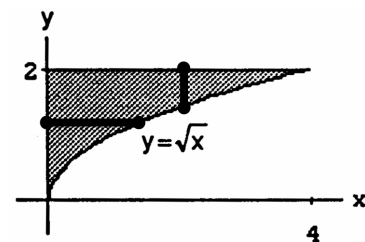
(b) $r(y) = 0$ and $R(y) = y^2$

$$\Rightarrow V = \int_0^2 \pi ([R(y)]^2 - [r(y)]^2) dy$$

$$= \pi \int_0^2 y^4 dy = \pi \left[\frac{y^5}{5} \right]_0^2 = \frac{32\pi}{5}$$

(c) $r(x) = 0$ and $R(x) = 2 - \sqrt{x} \Rightarrow V = \int_0^4 \pi ([R(x)]^2 - [r(x)]^2) dx = \pi \int_0^4 (2 - \sqrt{x})^2 dx$

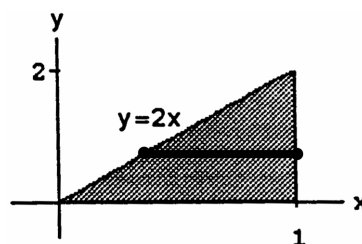
$$= \pi \int_0^4 (4 - 4\sqrt{x} + x) dx = \pi \left[4x - \frac{8x^{3/2}}{3} + \frac{x^2}{2} \right]_0^4 = \pi \left(16 - \frac{64}{3} + \frac{16}{2} \right) = \frac{8\pi}{3}$$



$$\begin{aligned}
 \text{(d) } r(y) &= 4 - y^2 \text{ and } R(y) = 4 \Rightarrow V = \int_0^2 \pi ([R(y)]^2 - [r(y)]^2) dy = \pi \int_0^2 [16 - (4 - y^2)^2] dy \\
 &= \pi \int_0^2 (16 - 16 + 8y^2 - y^4) dy = \pi \int_0^2 (8y^2 - y^4) dy = \pi \left[\frac{8}{3} y^3 - \frac{y^5}{5} \right]_0^2 = \pi \left(\frac{64}{3} - \frac{32}{5} \right) = \frac{224\pi}{15}
 \end{aligned}$$

$$48. \text{ (a) } r(y) = 0 \text{ and } R(y) = 1 - \frac{y}{2}$$

$$\begin{aligned}
 \Rightarrow V &= \int_0^2 \pi ([R(y)]^2 - [r(y)]^2) dy \\
 &= \pi \int_0^2 \left(1 - \frac{y}{2}\right)^2 dy = \pi \int_0^2 \left(1 - y + \frac{y^2}{4}\right) dy \\
 &= \pi \left[y - \frac{y^2}{2} + \frac{y^3}{12}\right]_0^2 = \pi \left(2 - \frac{4}{2} + \frac{8}{12}\right) = \frac{2\pi}{3}
 \end{aligned}$$

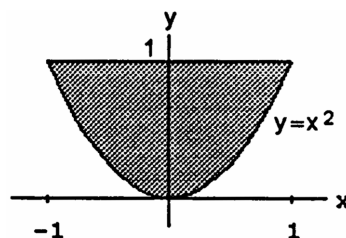


$$\text{(b) } r(y) = 1 \text{ and } R(y) = 2 - \frac{y}{2}$$

$$\begin{aligned}
 \Rightarrow V &= \int_0^2 \pi ([R(y)]^2 - [r(y)]^2) dy = \pi \int_0^2 \left[\left(2 - \frac{y}{2}\right)^2 - 1\right] dy = \pi \int_0^2 \left(4 - 2y + \frac{y^2}{4} - 1\right) dy \\
 &= \pi \int_0^2 \left(3 - 2y + \frac{y^2}{4}\right) dy = \pi \left[3y - y^2 + \frac{y^3}{12}\right]_0^2 = \pi \left(6 - 4 + \frac{8}{12}\right) = \pi \left(2 + \frac{2}{3}\right) = \frac{8\pi}{3}
 \end{aligned}$$

$$49. \text{ (a) } r(x) = 0 \text{ and } R(x) = 1 - x^2$$

$$\begin{aligned}
 \Rightarrow V &= \int_{-1}^1 \pi ([R(x)]^2 - [r(x)]^2) dx \\
 &= \pi \int_{-1}^1 (1 - x^2)^2 dx = \pi \int_{-1}^1 (1 - 2x^2 + x^4) dx \\
 &= \pi \left[x - \frac{2x^3}{3} + \frac{x^5}{5}\right]_{-1}^1 = 2\pi \left(1 - \frac{2}{3} + \frac{1}{5}\right) \\
 &= 2\pi \left(\frac{15-10+3}{15}\right) = \frac{16\pi}{15}
 \end{aligned}$$

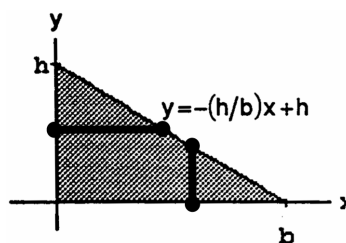


$$\begin{aligned}
 \text{(b) } r(x) &= 1 \text{ and } R(x) = 2 - x^2 \Rightarrow V = \int_{-1}^1 \pi ([R(x)]^2 - [r(x)]^2) dx = \pi \int_{-1}^1 [(2 - x^2)^2 - 1] dx \\
 &= \pi \int_{-1}^1 (4 - 4x^2 + x^4 - 1) dx = \pi \int_{-1}^1 (3 - 4x^2 + x^4) dx = \pi \left[3x - \frac{4}{3}x^3 + \frac{x^5}{5}\right]_{-1}^1 = 2\pi \left(3 - \frac{4}{3} + \frac{1}{5}\right) \\
 &= \frac{2\pi}{15} (45 - 20 + 3) = \frac{56\pi}{15}
 \end{aligned}$$

$$\begin{aligned}
 \text{(c) } r(x) &= 1 + x^2 \text{ and } R(x) = 2 \Rightarrow V = \int_{-1}^1 \pi ([R(x)]^2 - [r(x)]^2) dx = \pi \int_{-1}^1 [4 - (1 + x^2)^2] dx \\
 &= \pi \int_{-1}^1 (4 - 1 - 2x^2 - x^4) dx = \pi \int_{-1}^1 (3 - 2x^2 - x^4) dx = \pi \left[3x - \frac{2}{3}x^3 - \frac{x^5}{5}\right]_{-1}^1 = 2\pi \left(3 - \frac{2}{3} - \frac{1}{5}\right) \\
 &= \frac{2\pi}{15} (45 - 10 - 3) = \frac{64\pi}{15}
 \end{aligned}$$

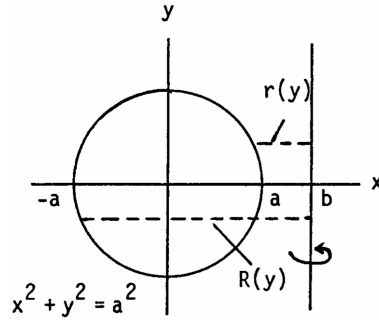
$$50. \text{ (a) } r(x) = 0 \text{ and } R(x) = -\frac{h}{b}x + h$$

$$\begin{aligned}
 \Rightarrow V &= \int_0^b \pi ([R(x)]^2 - [r(x)]^2) dx \\
 &= \pi \int_0^b \left(-\frac{h}{b}x + h\right)^2 dx \\
 &= \pi \int_0^b \left(\frac{h^2}{b^2}x^2 - \frac{2h^2}{b}x + h^2\right) dx \\
 &= \pi h^2 \left[\frac{x^3}{3b^2} - \frac{x^2}{b} + x\right]_0^b = \pi h^2 \left(\frac{b}{3} - b + b\right) = \frac{\pi h^2 b}{3}
 \end{aligned}$$



$$\begin{aligned}
 \text{(b) } r(y) &= 0 \text{ and } R(y) = b\left(1 - \frac{y}{h}\right) \Rightarrow V = \int_0^h \pi ([R(y)]^2 - [r(y)]^2) dy = \pi b^2 \int_0^h \left(1 - \frac{y}{h}\right)^2 dy \\
 &= \pi b^2 \int_0^h \left(1 - \frac{2y}{h} + \frac{y^2}{h^2}\right) dy = \pi b^2 \left[y - \frac{y^2}{h} + \frac{y^3}{3h^2}\right]_0^h = \pi b^2 \left(h - h + \frac{h}{3}\right) = \frac{\pi b^2 h}{3}
 \end{aligned}$$

$$\begin{aligned}
 51. \quad R(y) &= b + \sqrt{a^2 - y^2} \text{ and } r(y) = b - \sqrt{a^2 - y^2} \\
 \Rightarrow V &= \int_{-a}^a \pi ([R(y)]^2 - [r(y)]^2) dy \\
 &= \pi \int_{-a}^a \left[(b + \sqrt{a^2 - y^2})^2 - (b - \sqrt{a^2 - y^2})^2 \right] dy \\
 &= \pi \int_{-a}^a 4b\sqrt{a^2 - y^2} dy = 4b\pi \int_{-a}^a \sqrt{a^2 - y^2} dy \\
 &= 4b\pi \cdot \text{area of semicircle of radius } a = 4b\pi \cdot \frac{\pi a^2}{2} = 2a^2 b \pi^2
 \end{aligned}$$



$$52. \quad (a) \quad \text{A cross section has radius } r = \sqrt{2y} \text{ and area } \pi r^2 = 2\pi y. \text{ The volume is } \int_0^5 2\pi y dy = \pi [y^2]_0^5 = 25\pi.$$

$$(b) \quad V(h) = \int A(h) dh, \text{ so } \frac{dV}{dh} = A(h). \text{ Therefore } \frac{dV}{dt} = \frac{dV}{dh} \cdot \frac{dh}{dt} = A(h) \cdot \frac{dh}{dt}, \text{ so } \frac{dh}{dt} = \frac{1}{A(h)} \cdot \frac{dV}{dt}.$$

$$\text{For } h = 4, \text{ the area is } 2\pi(4) = 8\pi, \text{ so } \frac{dh}{dt} = \frac{1}{8\pi} \cdot 3 \frac{\text{units}^3}{\text{sec}} = \frac{3}{8\pi} \cdot \frac{\text{units}^3}{\text{sec}}.$$

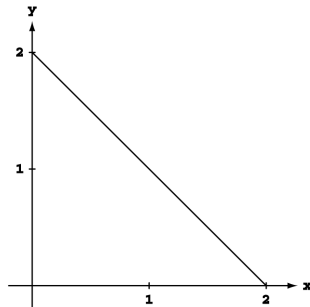
$$\begin{aligned}
 53. \quad (a) \quad R(y) &= \sqrt{a^2 - y^2} \Rightarrow V = \pi \int_{-a}^{h-a} (a^2 - y^2) dy = \pi \left[a^2 y - \frac{y^3}{3} \right]_{-a}^{h-a} = \pi \left[a^2 h - a^3 - \frac{(h-a)^3}{3} - \left(-a^3 + \frac{a^3}{3} \right) \right] \\
 &= \pi \left[a^2 h - \frac{1}{3} (h^3 - 3h^2 a + 3ha^2 - a^3) - \frac{a^3}{3} \right] = \pi \left(a^2 h - \frac{h^3}{3} + h^2 a - ha^2 \right) = \frac{\pi h^2 (3a - h)}{3}
 \end{aligned}$$

$$\begin{aligned}
 (b) \quad \text{Given } \frac{dV}{dt} &= 0.2 \text{ m}^3/\text{sec} \text{ and } a = 5 \text{ m, find } \frac{dh}{dt} \Big|_{h=4}. \text{ From part (a), } V(h) = \frac{\pi h^2 (15 - h)}{3} = 5\pi h^2 - \frac{\pi h^3}{3} \\
 \Rightarrow \frac{dV}{dh} &= 10\pi h - \pi h^2 \Rightarrow \frac{dV}{dt} = \frac{dV}{dh} \cdot \frac{dh}{dt} = \pi h(10 - h) \frac{dh}{dt} \Rightarrow \frac{dh}{dt} \Big|_{h=4} = \frac{0.2}{4\pi(10-4)} = \frac{1}{(20\pi)(6)} = \frac{1}{120\pi} \text{ m/sec.}
 \end{aligned}$$

54. Suppose the solid is produced by revolving $y = 2 - x$ about the y -axis. Cast a shadow of the solid on a plane parallel to the xy -plane.

Use an approximation such as the Trapezoid Rule, to

$$\text{estimate } \int_a^b \pi [R(y)]^2 dy \approx \sum_{k=1}^n \pi \left(\frac{d_k}{2} \right)^2 \Delta y.$$



55. The cross section of a solid right circular cylinder with a cone removed is a disk with radius R from which a disk of radius h has been removed. Thus its area is $A_1 = \pi R^2 - \pi h^2 = \pi (R^2 - h^2)$. The cross section of the hemisphere is a disk of radius $\sqrt{R^2 - h^2}$. Therefore its area is $A_2 = \pi (\sqrt{R^2 - h^2})^2 = \pi (R^2 - h^2)$. We can see that $A_1 = A_2$. The altitudes of both solids are R . Applying Cavalieri's Principle we find

$$\text{Volume of Hemisphere} = (\text{Volume of Cylinder}) - (\text{Volume of Cone}) = (\pi R^2) R - \frac{1}{3} \pi (R^2) R = \frac{2}{3} \pi R^3.$$

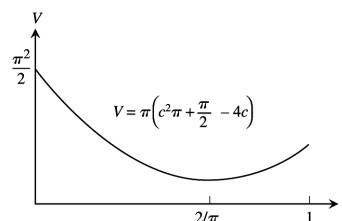
$$\begin{aligned}
 56. \quad R(x) &= \frac{x}{12} \sqrt{36 - x^2} \Rightarrow V = \int_0^6 \pi [R(x)]^2 dx = \pi \int_0^6 \frac{x^2}{144} (36 - x^2) dx = \frac{\pi}{144} \int_0^6 (36x^2 - x^4) dx \\
 &= \frac{\pi}{144} \left[12x^3 - \frac{x^5}{5} \right]_0^6 = \frac{\pi}{144} \left(12 \cdot 6^3 - \frac{6^5}{5} \right) = \frac{\pi \cdot 6^3}{144} \left(12 - \frac{36}{5} \right) = \left(\frac{196\pi}{144} \right) \left(\frac{60-36}{5} \right) = \frac{36\pi}{5} \text{ cm}^3. \text{ The plumb bob will} \\
 &\text{weigh about } W = (8.5) \left(\frac{36\pi}{5} \right) \approx 192 \text{ gm, to the nearest gram.}
 \end{aligned}$$

$$\begin{aligned}
 57. \quad R(y) &= \sqrt{256 - y^2} \Rightarrow V = \int_{-16}^{-7} \pi [R(y)]^2 dy = \pi \int_{-16}^{-7} (256 - y^2) dy = \pi \left[256y - \frac{y^3}{3} \right]_{-16}^{-7} \\
 &= \pi \left[(256)(-7) + \frac{7^3}{3} - \left((256)(-16) + \frac{16^3}{3} \right) \right] = \pi \left(\frac{7^3}{3} + 256(16 - 7) - \frac{16^3}{3} \right) = 1053\pi \text{ cm}^3 \approx 3308 \text{ cm}^3
 \end{aligned}$$

58. (a) $R(x) = |c - \sin x|$, so $V = \pi \int_0^\pi [R(x)]^2 dx = \pi \int_0^\pi (c - \sin x)^2 dx = \pi \int_0^\pi (c^2 - 2c \sin x + \sin^2 x) dx$
 $= \pi \int_0^\pi (c^2 - 2c \sin x + \frac{1 - \cos 2x}{2}) dx = \pi \int_0^\pi (c^2 + \frac{1}{2} - 2c \sin x - \frac{\cos 2x}{2}) dx$
 $= \pi \left[(c^2 + \frac{1}{2})x + 2c \cos x - \frac{\sin 2x}{4} \right]_0^\pi = \pi \left[(c^2\pi + \frac{\pi}{2} - 2c - 0) - (0 + 2c - 0) \right] = \pi (c^2\pi + \frac{\pi}{2} - 4c)$. Let
 $V(c) = \pi (c^2\pi + \frac{\pi}{2} - 4c)$. We find the extreme values of $V(c)$: $\frac{dV}{dc} = \pi(2c\pi - 4) = 0 \Rightarrow c = \frac{2}{\pi}$ is a critical
 point, and $V(\frac{2}{\pi}) = \pi (\frac{4}{\pi} + \frac{\pi}{2} - \frac{8}{\pi}) = \pi (\frac{\pi}{2} - \frac{4}{\pi}) = \frac{\pi^2}{2} - 4$; Evaluate V at the endpoints: $V(0) = \frac{\pi^2}{2}$ and
 $V(1) = \pi (\frac{3}{2}\pi - 4) = \frac{\pi^2}{2} - (4 - \pi)\pi$. Now we see that the function's absolute minimum value is $\frac{\pi^2}{2} - 4$,
 taken on at the critical point $c = \frac{2}{\pi}$. (See also the accompanying graph.)

- (b) From the discussion in part (a) we conclude that the function's absolute maximum value is $\frac{\pi^2}{2}$, taken on at the endpoint $c = 0$.

- (c) The graph of the solid's volume as a function of c for $0 \leq c \leq 1$ is given at the right. As c moves away from $[0, 1]$ the volume of the solid increases without bound. If we approximate the solid as a set of solid disks, we can see that the radius of a typical disk increases without bounds as c moves away from $[0, 1]$.



59. Volume of the solid generated by rotating the region bounded by the x -axis and $y = f(x)$ from $x = a$ to $x = b$ about the

x -axis is $V = \int_a^b \pi[f(x)]^2 dx = 4\pi$, and the volume of the solid generated by rotating the same region about the line

$y = -1$ is $V = \int_a^b \pi[f(x) + 1]^2 dx = 8\pi$. Thus $\int_a^b \pi[f(x) + 1]^2 dx - \int_a^b \pi[f(x)]^2 dx = 8\pi - 4\pi$

$$\Rightarrow \pi \int_a^b ([f(x)]^2 + 2f(x) + 1 - [f(x)]^2) dx = 4\pi \Rightarrow \int_a^b (2f(x) + 1) dx = 4 \Rightarrow 2 \int_a^b f(x) dx + \int_a^b dx = 4$$

$$\Rightarrow \int_a^b f(x) dx + \frac{1}{2}(b - a) = 2 \Rightarrow \int_a^b f(x) dx = \frac{4 - b + a}{2}$$

60. Volume of the solid generated by rotating the region bounded by the x -axis and $y = f(x)$ from $x = a$ to $x = b$ about the

x -axis is $V = \int_a^b \pi[f(x)]^2 dx = 6\pi$, and the volume of the solid generated by rotating the same region about the line

$y = -2$ is $V = \int_a^b \pi[f(x) + 2]^2 dx = 10\pi$. Thus $\int_a^b \pi[f(x) + 2]^2 dx - \int_a^b \pi[f(x)]^2 dx = 10\pi - 6\pi$

$$\Rightarrow \pi \int_a^b ([f(x)]^2 + 4f(x) + 4 - [f(x)]^2) dx = 4\pi \Rightarrow \int_a^b (4f(x) + 4) dx = 4 \Rightarrow 4 \int_a^b f(x) dx + 4 \int_a^b dx = 4$$

$$\Rightarrow \int_a^b f(x) dx + (b - a) = 1 \Rightarrow \int_a^b f(x) dx = 1 - b + a$$

6.2 VOLUME USING CYLINDRICAL SHELLS

1. For the sketch given, $a = 0$, $b = 2$;

$$V = \int_a^b 2\pi \left(\begin{matrix} \text{shell} \\ \text{radius} \end{matrix} \right) \left(\begin{matrix} \text{shell} \\ \text{height} \end{matrix} \right) dx = \int_0^2 2\pi x \left(1 + \frac{x^2}{4} \right) dx = 2\pi \int_0^2 \left(x + \frac{x^3}{4} \right) dx = 2\pi \left[\frac{x^2}{2} + \frac{x^4}{16} \right]_0^2 = 2\pi \left(\frac{4}{2} + \frac{16}{16} \right) = 2\pi \cdot 3 = 6\pi$$

2. For the sketch given, $a = 0$, $b = 2$;

$$V = \int_a^b 2\pi \left(\begin{matrix} \text{shell} \\ \text{radius} \end{matrix} \right) \left(\begin{matrix} \text{shell} \\ \text{height} \end{matrix} \right) dx = \int_0^2 2\pi x \left(2 - \frac{x^2}{4} \right) dx = 2\pi \int_0^2 \left(2x - \frac{x^3}{4} \right) dx = 2\pi \left[x^2 - \frac{x^4}{16} \right]_0^2 = 2\pi(4 - 1) = 6\pi$$

3. For the sketch given, $c = 0$, $d = \sqrt{2}$;

$$V = \int_c^d 2\pi \left(\begin{matrix} \text{shell} \\ \text{radius} \end{matrix} \right) \left(\begin{matrix} \text{shell} \\ \text{height} \end{matrix} \right) dy = \int_0^{\sqrt{2}} 2\pi y \cdot (y^2) dy = 2\pi \int_0^{\sqrt{2}} y^3 dy = 2\pi \left[\frac{y^4}{4} \right]_0^{\sqrt{2}} = 2\pi$$

4. For the sketch given,
- $c = 0$
- ,
- $d = \sqrt{3}$
- ;

$$V = \int_c^d 2\pi \left(\begin{smallmatrix} \text{shell} \\ \text{radius} \end{smallmatrix} \right) \left(\begin{smallmatrix} \text{shell} \\ \text{height} \end{smallmatrix} \right) dy = \int_0^{\sqrt{3}} 2\pi y \cdot [3 - (3 - y^2)] dy = 2\pi \int_0^{\sqrt{3}} y^3 dy = 2\pi \left[\frac{y^4}{4} \right]_0^{\sqrt{3}} = \frac{9\pi}{2}$$

5. For the sketch given,
- $a = 0$
- ,
- $b = \sqrt{3}$
- ;

$$V = \int_a^b 2\pi \left(\begin{smallmatrix} \text{shell} \\ \text{radius} \end{smallmatrix} \right) \left(\begin{smallmatrix} \text{shell} \\ \text{height} \end{smallmatrix} \right) dx = \int_0^{\sqrt{3}} 2\pi x \cdot (\sqrt{x^2 + 1}) dx;$$

$$[u = x^2 + 1 \Rightarrow du = 2x dx; x = 0 \Rightarrow u = 1, x = \sqrt{3} \Rightarrow u = 4]$$

$$\rightarrow V = \pi \int_1^4 u^{1/2} du = \pi \left[\frac{2}{3} u^{3/2} \right]_1^4 = \frac{2\pi}{3} (4^{3/2} - 1) = \left(\frac{2\pi}{3} \right) (8 - 1) = \frac{14\pi}{3}$$

6. For the sketch given,
- $a = 0$
- ,
- $b = 3$
- ;

$$V = \int_a^b 2\pi \left(\begin{smallmatrix} \text{shell} \\ \text{radius} \end{smallmatrix} \right) \left(\begin{smallmatrix} \text{shell} \\ \text{height} \end{smallmatrix} \right) dx = \int_0^3 2\pi x \left(\frac{9x}{\sqrt{x^3 + 9}} \right) dx;$$

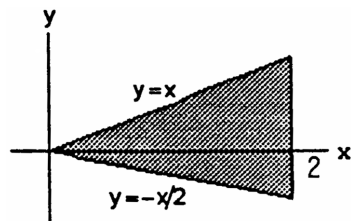
$$[u = x^3 + 9 \Rightarrow du = 3x^2 dx \Rightarrow 3 du = 9x^2 dx; x = 0 \Rightarrow u = 9, x = 3 \Rightarrow u = 36]$$

$$\rightarrow V = 2\pi \int_9^{36} 3u^{-1/2} du = 6\pi [2u^{1/2}]_9^{36} = 12\pi (\sqrt{36} - \sqrt{9}) = 36\pi$$

- 7.
- $a = 0$
- ,
- $b = 2$
- ;

$$V = \int_a^b 2\pi \left(\begin{smallmatrix} \text{shell} \\ \text{radius} \end{smallmatrix} \right) \left(\begin{smallmatrix} \text{shell} \\ \text{height} \end{smallmatrix} \right) dx = \int_0^2 2\pi x \left[x - \left(-\frac{x}{2} \right) \right] dx$$

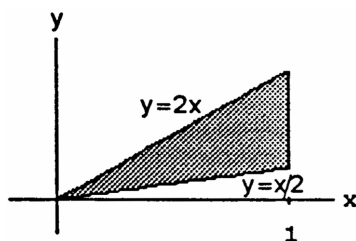
$$= \int_0^2 2\pi x^2 \cdot \frac{3}{2} dx = \pi \int_0^2 3x^2 dx = \pi [x^3]_0^2 = 8\pi$$



- 8.
- $a = 0$
- ,
- $b = 1$
- ;

$$V = \int_a^b 2\pi \left(\begin{smallmatrix} \text{shell} \\ \text{radius} \end{smallmatrix} \right) \left(\begin{smallmatrix} \text{shell} \\ \text{height} \end{smallmatrix} \right) dx = \int_0^1 2\pi x \left(2x - \frac{x}{2} \right) dx$$

$$= \pi \int_0^1 2 \left(\frac{3x^2}{2} \right) dx = \pi \int_0^1 3x^2 dx = \pi [x^3]_0^1 = \pi$$

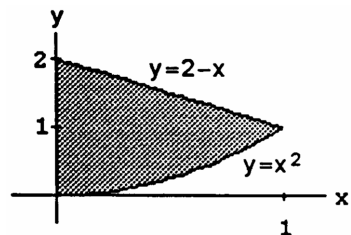


- 9.
- $a = 0$
- ,
- $b = 1$
- ;

$$V = \int_a^b 2\pi \left(\begin{smallmatrix} \text{shell} \\ \text{radius} \end{smallmatrix} \right) \left(\begin{smallmatrix} \text{shell} \\ \text{height} \end{smallmatrix} \right) dx = \int_0^1 2\pi x [(2 - x) - x^2] dx$$

$$= 2\pi \int_0^1 (2x - x^2 - x^3) dx = 2\pi \left[x^2 - \frac{x^3}{3} - \frac{x^4}{4} \right]_0^1$$

$$= 2\pi \left(1 - \frac{1}{3} - \frac{1}{4} \right) = 2\pi \left(\frac{12-4-3}{12} \right) = \frac{10\pi}{12} = \frac{5\pi}{6}$$

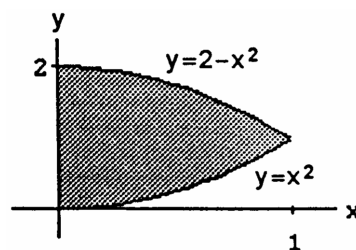


- 10.
- $a = 0$
- ,
- $b = 1$
- ;

$$V = \int_a^b 2\pi \left(\begin{smallmatrix} \text{shell} \\ \text{radius} \end{smallmatrix} \right) \left(\begin{smallmatrix} \text{shell} \\ \text{height} \end{smallmatrix} \right) dx = \int_0^1 2\pi x [(2 - x^2) - x^2] dx$$

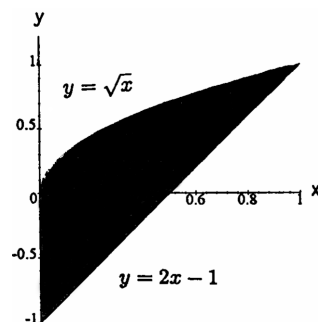
$$= 2\pi \int_0^1 x (2 - 2x^2) dx = 4\pi \int_0^1 (x - x^3) dx$$

$$= 4\pi \left[\frac{x^2}{2} - \frac{x^4}{4} \right]_0^1 = 4\pi \left(\frac{1}{2} - \frac{1}{4} \right) = \pi$$

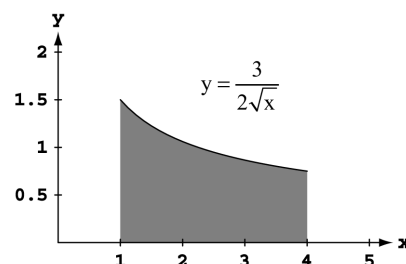


11. $a = 0, b = 1$;

$$\begin{aligned} V &= \int_a^b 2\pi \left(\begin{smallmatrix} \text{shell} \\ \text{radius} \end{smallmatrix} \right) \left(\begin{smallmatrix} \text{shell} \\ \text{height} \end{smallmatrix} \right) dx = \int_0^1 2\pi x [\sqrt{x} - (2x - 1)] dx \\ &= 2\pi \int_0^1 (x^{3/2} - 2x^2 + x) dx = 2\pi \left[\frac{2}{5} x^{5/2} - \frac{2}{3} x^3 + \frac{1}{2} x^2 \right]_0^1 \\ &= 2\pi \left(\frac{2}{5} - \frac{2}{3} + \frac{1}{2} \right) = 2\pi \left(\frac{12-20+15}{30} \right) = \frac{7\pi}{15} \end{aligned}$$


 12. $a = 1, b = 4$;

$$\begin{aligned} V &= \int_a^b 2\pi \left(\begin{smallmatrix} \text{shell} \\ \text{radius} \end{smallmatrix} \right) \left(\begin{smallmatrix} \text{shell} \\ \text{height} \end{smallmatrix} \right) dx = \int_1^4 2\pi x \left(\frac{3}{2} x^{-1/2} \right) dx \\ &= 3\pi \int_1^4 x^{1/2} dx = 3\pi \left[\frac{2}{3} x^{3/2} \right]_1^4 = 2\pi (4^{3/2} - 1) \\ &= 2\pi(8 - 1) = 14\pi \end{aligned}$$


 13. (a) $xf(x) = \begin{cases} x \cdot \frac{\sin x}{x}, & 0 < x \leq \pi \\ x, & x = 0 \end{cases} \Rightarrow xf(x) = \begin{cases} \sin x, & 0 < x \leq \pi \\ 0, & x = 0 \end{cases}$; since $\sin 0 = 0$ we have

$$xf(x) = \begin{cases} \sin x, & 0 < x \leq \pi \\ \sin x, & x = 0 \end{cases} \Rightarrow xf(x) = \sin x, 0 \leq x \leq \pi$$

 (b) $V = \int_a^b 2\pi \left(\begin{smallmatrix} \text{shell} \\ \text{radius} \end{smallmatrix} \right) \left(\begin{smallmatrix} \text{shell} \\ \text{height} \end{smallmatrix} \right) dx = \int_0^\pi 2\pi x \cdot f(x) dx$ and $x \cdot f(x) = \sin x, 0 \leq x \leq \pi$ by part (a)

$$\Rightarrow V = 2\pi \int_0^\pi \sin x dx = 2\pi [-\cos x]_0^\pi = 2\pi(-\cos \pi + \cos 0) = 4\pi$$

 14. (a) $xg(x) = \begin{cases} x \cdot \frac{\tan^2 x}{x}, & 0 < x \leq \frac{\pi}{4} \\ x \cdot 0, & x = 0 \end{cases} \Rightarrow xg(x) = \begin{cases} \tan^2 x, & 0 < x \leq \pi/4 \\ 0, & x = 0 \end{cases}$; since $\tan 0 = 0$ we have

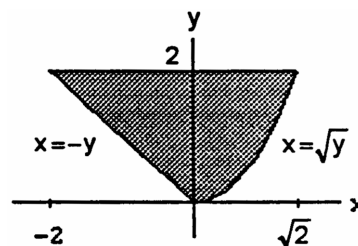
$$xg(x) = \begin{cases} \tan^2 x, & 0 < x \leq \pi/4 \\ \tan^2 x, & x = 0 \end{cases} \Rightarrow xg(x) = \tan^2 x, 0 \leq x \leq \pi/4$$

 (b) $V = \int_a^b 2\pi \left(\begin{smallmatrix} \text{shell} \\ \text{radius} \end{smallmatrix} \right) \left(\begin{smallmatrix} \text{shell} \\ \text{height} \end{smallmatrix} \right) dx = \int_0^{\pi/4} 2\pi x \cdot g(x) dx$ and $x \cdot g(x) = \tan^2 x, 0 \leq x \leq \pi/4$ by part (a)

$$\Rightarrow V = 2\pi \int_0^{\pi/4} \tan^2 x dx = 2\pi \int_0^{\pi/4} (\sec^2 x - 1) dx = 2\pi [\tan x - x]_0^{\pi/4} = 2\pi \left(1 - \frac{\pi}{4} \right) = \frac{4\pi - \pi^2}{2}$$

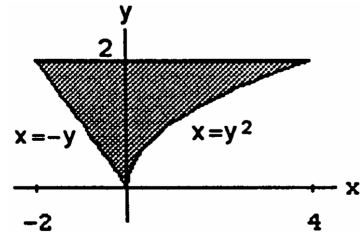
 15. $c = 0, d = 2$;

$$\begin{aligned} V &= \int_c^d 2\pi \left(\begin{smallmatrix} \text{shell} \\ \text{radius} \end{smallmatrix} \right) \left(\begin{smallmatrix} \text{shell} \\ \text{height} \end{smallmatrix} \right) dy = \int_0^2 2\pi y [\sqrt{y} - (-y)] dy \\ &= 2\pi \int_0^2 (y^{3/2} + y^2) dy = 2\pi \left[\frac{2y^{5/2}}{5} + \frac{y^3}{3} \right]_0^2 \\ &= 2\pi \left[\frac{2}{5} \left(\sqrt{2} \right)^5 + \frac{2^3}{3} \right] = 2\pi \left(\frac{8\sqrt{2}}{5} + \frac{8}{3} \right) = 16\pi \left(\frac{\sqrt{2}}{5} + \frac{1}{3} \right) \\ &= \frac{16\pi}{15} (3\sqrt{2} + 5) \end{aligned}$$

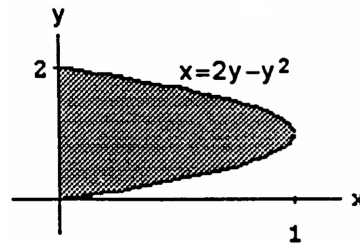


16. $c = 0, d = 2$;

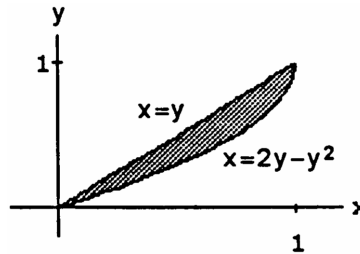
$$\begin{aligned} V &= \int_c^d 2\pi \left(\text{shell radius} \right) \left(\text{shell height} \right) dy = \int_0^2 2\pi y [y^2 - (-y)] dy \\ &= 2\pi \int_0^2 (y^3 + y^2) dy = 2\pi \left[\frac{y^4}{4} + \frac{y^3}{3} \right]_0^2 = 16\pi \left(\frac{2}{4} + \frac{1}{3} \right) \\ &= 16\pi \left(\frac{5}{6} \right) = \frac{40\pi}{3} \end{aligned}$$


 17. $c = 0, d = 2$;

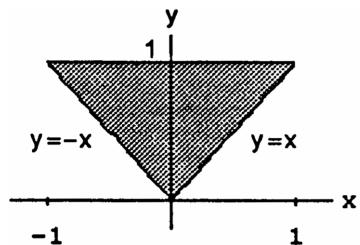
$$\begin{aligned} V &= \int_c^d 2\pi \left(\text{shell radius} \right) \left(\text{shell height} \right) dy = \int_0^2 2\pi y (2y - y^2) dy \\ &= 2\pi \int_0^2 (2y^2 - y^3) dy = 2\pi \left[\frac{2y^3}{3} - \frac{y^4}{4} \right]_0^2 = 2\pi \left(\frac{16}{3} - \frac{16}{4} \right) \\ &= 32\pi \left(\frac{1}{3} - \frac{1}{4} \right) = \frac{32\pi}{12} = \frac{8\pi}{3} \end{aligned}$$


 18. $c = 0, d = 1$;

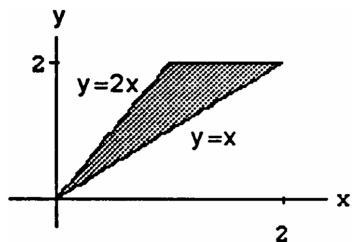
$$\begin{aligned} V &= \int_c^d 2\pi \left(\text{shell radius} \right) \left(\text{shell height} \right) dy = \int_0^1 2\pi y (2y - y^2 - y) dy \\ &= 2\pi \int_0^1 y (y - y^2) dy = 2\pi \int_0^1 (y^2 - y^3) dy \\ &= 2\pi \left[\frac{y^3}{3} - \frac{y^4}{4} \right]_0^1 = 2\pi \left(\frac{1}{3} - \frac{1}{4} \right) = \frac{\pi}{6} \end{aligned}$$


 19. $c = 0, d = 1$;

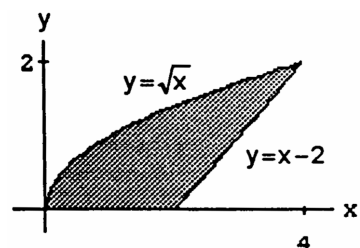
$$\begin{aligned} V &= \int_c^d 2\pi \left(\text{shell radius} \right) \left(\text{shell height} \right) dy = 2\pi \int_0^1 y [y - (-y)] dy \\ &= 2\pi \int_0^1 2y^2 dy = \frac{4\pi}{3} [y^3]_0^1 = \frac{4\pi}{3} \end{aligned}$$


 20. $c = 0, d = 2$;

$$\begin{aligned} V &= \int_c^d 2\pi \left(\text{shell radius} \right) \left(\text{shell height} \right) dy = \int_0^2 2\pi y \left(y - \frac{y}{2} \right) dy \\ &= 2\pi \int_0^2 \frac{y^2}{2} dy = \frac{\pi}{3} [y^3]_0^2 = \frac{8\pi}{3} \end{aligned}$$

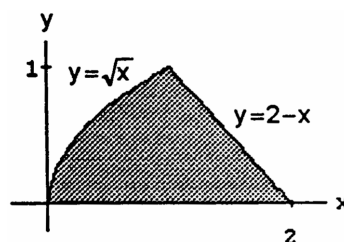

 21. $c = 0, d = 2$;

$$\begin{aligned} V &= \int_c^d 2\pi \left(\text{shell radius} \right) \left(\text{shell height} \right) dy = \int_0^2 2\pi y [(2 + y) - y^2] dy \\ &= 2\pi \int_0^2 (2y + y^2 - y^3) dy = 2\pi \left[y^2 + \frac{y^3}{3} - \frac{y^4}{4} \right]_0^2 \\ &= 2\pi \left(4 + \frac{8}{3} - \frac{16}{4} \right) = \frac{\pi}{6} (48 + 32 - 48) = \frac{16\pi}{3} \end{aligned}$$



22. $c = 0, d = 1$;

$$\begin{aligned}
 V &= \int_c^d 2\pi \left(\text{shell radius} \right) \left(\text{shell height} \right) dy = \int_0^1 2\pi y [(2-y) - y^2] dy \\
 &= 2\pi \int_0^1 (2y - y^2 - y^3) dy = 2\pi \left[y^2 - \frac{y^3}{3} - \frac{y^4}{4} \right]_0^1 \\
 &= 2\pi \left(1 - \frac{1}{3} - \frac{1}{4} \right) = \frac{\pi}{6} (12 - 4 - 3) = \frac{5\pi}{6}
 \end{aligned}$$



23. (a) $V = \int_a^b 2\pi \left(\text{shell radius} \right) \left(\text{shell height} \right) dx = \int_0^2 2\pi x (3x) dx = 6\pi \int_0^2 x^2 dx = 2\pi [x^3]_0^2 = 16\pi$
- (b) $V = \int_a^b 2\pi \left(\text{shell radius} \right) \left(\text{shell height} \right) dx = \int_0^2 2\pi (4-x) (3x) dx = 6\pi \int_0^2 (4x - x^2) dx = 6\pi [2x^2 - \frac{1}{3}x^3]_0^2 = 6\pi (8 - \frac{8}{3}) = 32\pi$
- (c) $V = \int_a^b 2\pi \left(\text{shell radius} \right) \left(\text{shell height} \right) dx = \int_0^2 2\pi (x+1) (3x) dx = 6\pi \int_0^2 (x^2 + x) dx = 6\pi [\frac{1}{3}x^3 + \frac{1}{2}x^2]_0^2 = 6\pi (\frac{8}{3} + 2) = 28\pi$
- (d) $V = \int_c^d 2\pi \left(\text{shell radius} \right) \left(\text{shell height} \right) dy = \int_0^6 2\pi y (2 - \frac{1}{3}y) dy = 2\pi \int_0^6 (2y - \frac{1}{3}y^2) dy = 2\pi [y^2 - \frac{1}{9}y^3]_0^6 = 2\pi (36 - 24) = 24\pi$
- (e) $V = \int_c^d 2\pi \left(\text{shell radius} \right) \left(\text{shell height} \right) dy = \int_0^6 2\pi (7-y) (2 - \frac{1}{3}y) dy = 2\pi \int_0^6 (14 - \frac{13}{3}y + \frac{1}{3}y^2) dy = 2\pi [14y - \frac{13}{6}y^2 + \frac{1}{9}y^3]_0^6 = 2\pi (84 - 78 + 24) = 60\pi$
- (f) $V = \int_c^d 2\pi \left(\text{shell radius} \right) \left(\text{shell height} \right) dy = \int_0^6 2\pi (y+2) (2 - \frac{1}{3}y) dy = 2\pi \int_0^6 (4 + \frac{4}{3}y - \frac{1}{3}y^2) dy = 2\pi [4y + \frac{2}{3}y^2 - \frac{1}{9}y^3]_0^6 = 2\pi (24 + 24 - 24) = 48\pi$
24. (a) $V = \int_a^b 2\pi \left(\text{shell radius} \right) \left(\text{shell height} \right) dx = \int_0^2 2\pi x (8 - x^3) dx = 2\pi \int_0^2 (8x - x^4) dx = 2\pi [4x^2 - \frac{1}{5}x^5]_0^2 = 2\pi (16 - \frac{32}{5}) = \frac{96\pi}{5}$
- (b) $V = \int_a^b 2\pi \left(\text{shell radius} \right) \left(\text{shell height} \right) dx = \int_0^2 2\pi (3-x) (8 - x^3) dx = 2\pi \int_0^2 (24 - 8x - 3x^3 + x^4) dx = 2\pi [24x - 4x^2 - \frac{3}{4}x^4 + \frac{1}{5}x^5]_0^2 = 2\pi (48 - 16 - 12 + \frac{32}{5}) = \frac{264\pi}{5}$
- (c) $V = \int_a^b 2\pi \left(\text{shell radius} \right) \left(\text{shell height} \right) dx = \int_0^2 2\pi (x+2) (8 - x^3) dx = 2\pi \int_0^2 (16 + 8x - 2x^3 - x^4) dx = 2\pi [16x + 4x^2 - \frac{1}{2}x^4 - \frac{1}{5}x^5]_0^2 = 2\pi (32 + 16 - 8 - \frac{32}{5}) = \frac{336\pi}{5}$
- (d) $V = \int_c^d 2\pi \left(\text{shell radius} \right) \left(\text{shell height} \right) dy = \int_0^8 2\pi y \cdot y^{1/3} dy = 2\pi \int_0^8 y^{4/3} dy = \frac{6\pi}{7} [y^{7/3}]_0^8 = \frac{6\pi}{7} (128) = \frac{768\pi}{7}$
- (e) $V = \int_c^d 2\pi \left(\text{shell radius} \right) \left(\text{shell height} \right) dy = \int_0^8 2\pi (8-y) y^{1/3} dy = 2\pi \int_0^8 (8y^{1/3} - y^{4/3}) dy = 2\pi [6y^{4/3} - \frac{3}{7}y^{7/3}]_0^8 = 2\pi (96 - \frac{384}{7}) = \frac{576\pi}{7}$
- (f) $V = \int_c^d 2\pi \left(\text{shell radius} \right) \left(\text{shell height} \right) dy = \int_0^8 2\pi (y+1) y^{1/3} dy = 2\pi \int_0^8 (y^{4/3} + y^{1/3}) dy = 2\pi [\frac{3}{7}y^{7/3} + \frac{3}{4}y^{4/3}]_0^8 = 2\pi (\frac{384}{7} + 12) = \frac{936\pi}{7}$
25. (a) $V = \int_a^b 2\pi \left(\text{shell radius} \right) \left(\text{shell height} \right) dx = \int_{-1}^2 2\pi (2-x) (x+2-x^2) dx = 2\pi \int_{-1}^2 (4-3x^2+x^3) dx = 2\pi [4x - x^3 + \frac{1}{4}x^4]_{-1}^2 = 2\pi (8 - 8 + 4) - 2\pi (-4 + 1 + \frac{1}{4}) = \frac{27\pi}{2}$
- (b) $V = \int_a^b 2\pi \left(\text{shell radius} \right) \left(\text{shell height} \right) dx = \int_{-1}^2 2\pi (x+1) (x+2-x^2) dx = 2\pi \int_{-1}^2 (2+3x-x^3) dx = 2\pi [2x + \frac{3}{2}x^2 - \frac{1}{4}x^4]_{-1}^2 = 2\pi (4 + 6 - 4) - 2\pi (-2 + \frac{3}{2} - \frac{1}{4}) = \frac{27\pi}{2}$
- (c) $V = \int_c^d 2\pi \left(\text{shell radius} \right) \left(\text{shell height} \right) dy = \int_0^1 2\pi y (\sqrt{y} - (-\sqrt{y})) dy + \int_1^4 2\pi y (\sqrt{y} - (y-2)) dy = 4\pi \int_0^1 y^{3/2} dy + 2\pi \int_1^4 (y^{3/2} - y^2 + 2y) dy = \frac{8\pi}{5} [y^{5/2}]_0^1 + 2\pi [\frac{2}{5}y^{5/2} - \frac{1}{3}y^3 + y^2]_1^4 = \frac{8\pi}{5} (1) + 2\pi (\frac{64}{5} - \frac{64}{3} + 16) - 2\pi (\frac{2}{5} - \frac{1}{3} + 1) = \frac{72\pi}{5}$

$$\begin{aligned}
 \text{(d)} \quad V &= \int_c^d 2\pi \left(\frac{\text{shell}}{\text{radius}} \right) \left(\frac{\text{shell}}{\text{height}} \right) dy = \int_0^1 2\pi (4-y)(\sqrt{y} - (-\sqrt{y})) dy + \int_1^4 2\pi (4-y)(\sqrt{y} - (y-2)) dy \\
 &= 4\pi \int_0^1 (4\sqrt{y} - y^{3/2}) dy + 2\pi \int_1^4 (y^2 - y^{3/2} - 6y + 4\sqrt{y} + 8) dy \\
 &= 4\pi \left[\frac{8}{3} y^{3/2} - \frac{2}{5} y^{5/2} \right]_0^1 + 2\pi \left[\frac{1}{3} y^3 - \frac{2}{5} y^{5/2} - 3y^2 + \frac{8}{3} y^{3/2} + 8y \right]_1^4 \\
 &= 4\pi \left(\frac{8}{3} - \frac{2}{5} \right) + 2\pi \left(\frac{64}{3} - \frac{64}{5} - 48 + \frac{64}{3} + 32 \right) - 2\pi \left(\frac{1}{3} - \frac{2}{5} - 3 + \frac{8}{3} + 8 \right) = \frac{108\pi}{5}
 \end{aligned}$$

$$\begin{aligned}
 26. \text{ (a)} \quad V &= \int_a^b 2\pi \left(\frac{\text{shell}}{\text{radius}} \right) \left(\frac{\text{shell}}{\text{height}} \right) dx = \int_{-1}^1 2\pi (1-x)(4-3x^2-x^4) dx = 2\pi \int_{-1}^1 (x^5 - x^4 + 3x^3 - 3x^2 - 4x + 4) dx \\
 &= 2\pi \left[\frac{1}{6} x^6 - \frac{1}{5} x^5 + \frac{3}{4} x^4 - x^3 - 2x^2 + 4x \right]_{-1}^1 = 2\pi \left(\frac{1}{6} - \frac{1}{5} + \frac{3}{4} - 1 - 2 + 4 \right) - 2\pi \left(\frac{1}{6} + \frac{1}{5} + \frac{3}{4} + 1 - 2 - 4 \right) = \frac{56\pi}{5}
 \end{aligned}$$

$$\begin{aligned}
 \text{(b)} \quad V &= \int_c^d 2\pi \left(\frac{\text{shell}}{\text{radius}} \right) \left(\frac{\text{shell}}{\text{height}} \right) dy = \int_0^1 2\pi y (\sqrt[4]{y} - (-\sqrt[4]{y})) dy + \int_1^4 2\pi y \left[\sqrt{\frac{4-y}{3}} - \left(-\sqrt{\frac{4-y}{3}} \right) \right] dy \\
 &= 4\pi \int_0^1 y^{5/4} dy + \frac{4\pi}{\sqrt{3}} \int_1^4 y \sqrt{4-y} dy \quad [u = 4-y \Rightarrow y = 4-u \Rightarrow du = -dy; y = 1 \Rightarrow u = 3, y = 4 \Rightarrow u = 0] \\
 &= \frac{16\pi}{9} [y^{9/4}]_0^1 - \frac{4\pi}{\sqrt{3}} \int_3^0 (4-u) \sqrt{u} du = \frac{16\pi}{9} (1) + \frac{4\pi}{\sqrt{3}} \int_0^3 (4\sqrt{u} - u^{3/2}) du = \frac{16\pi}{9} + \frac{4\pi}{\sqrt{3}} \left[\frac{8}{3} u^{3/2} - \frac{2}{5} u^{5/2} \right]_0^3 \\
 &= \frac{16\pi}{9} + \frac{4\pi}{\sqrt{3}} \left(8\sqrt{3} - \frac{18}{5} \sqrt{3} \right) = \frac{16\pi}{9} + \frac{88\pi}{5} = \frac{872\pi}{45}
 \end{aligned}$$

$$\begin{aligned}
 27. \text{ (a)} \quad V &= \int_c^d 2\pi \left(\frac{\text{shell}}{\text{radius}} \right) \left(\frac{\text{shell}}{\text{height}} \right) dy = \int_0^1 2\pi y \cdot 12 (y^2 - y^3) dy = 24\pi \int_0^1 (y^3 - y^4) dy = 24\pi \left[\frac{y^4}{4} - \frac{y^5}{5} \right]_0^1 \\
 &= 24\pi \left(\frac{1}{4} - \frac{1}{5} \right) = \frac{24\pi}{20} = \frac{6\pi}{5}
 \end{aligned}$$

$$\begin{aligned}
 \text{(b)} \quad V &= \int_c^d 2\pi \left(\frac{\text{shell}}{\text{radius}} \right) \left(\frac{\text{shell}}{\text{height}} \right) dy = \int_0^1 2\pi (1-y) [12 (y^2 - y^3)] dy = 24\pi \int_0^1 (1-y) (y^2 - y^3) dy \\
 &= 24\pi \int_0^1 (y^2 - 2y^3 + y^4) dy = 24\pi \left[\frac{y^3}{3} - \frac{y^4}{2} + \frac{y^5}{5} \right]_0^1 = 24\pi \left(\frac{1}{3} - \frac{1}{2} + \frac{1}{5} \right) = 24\pi \left(\frac{1}{30} \right) = \frac{4\pi}{5}
 \end{aligned}$$

$$\begin{aligned}
 \text{(c)} \quad V &= \int_c^d 2\pi \left(\frac{\text{shell}}{\text{radius}} \right) \left(\frac{\text{shell}}{\text{height}} \right) dy = \int_0^1 2\pi \left(\frac{8}{5} - y \right) [12 (y^2 - y^3)] dy = 24\pi \int_0^1 \left(\frac{8}{5} - y \right) (y^2 - y^3) dy \\
 &= 24\pi \int_0^1 \left(\frac{8}{5} y^2 - \frac{13}{5} y^3 + y^4 \right) dy = 24\pi \left[\frac{8}{15} y^3 - \frac{13}{20} y^4 + \frac{y^5}{5} \right]_0^1 = 24\pi \left(\frac{8}{15} - \frac{13}{20} + \frac{1}{5} \right) = \frac{24\pi}{60} (32 - 39 + 12) \\
 &= \frac{24\pi}{12} = 2\pi
 \end{aligned}$$

$$\begin{aligned}
 \text{(d)} \quad V &= \int_c^d 2\pi \left(\frac{\text{shell}}{\text{radius}} \right) \left(\frac{\text{shell}}{\text{height}} \right) dy = \int_0^1 2\pi \left(y + \frac{2}{5} \right) [12 (y^2 - y^3)] dy = 24\pi \int_0^1 \left(y + \frac{2}{5} \right) (y^2 - y^3) dy \\
 &= 24\pi \int_0^1 \left(y^3 - y^4 + \frac{2}{5} y^2 - \frac{2}{5} y^3 \right) dy = 24\pi \int_0^1 \left(\frac{2}{5} y^2 + \frac{3}{5} y^3 - y^4 \right) dy = 24\pi \left[\frac{2}{15} y^3 + \frac{3}{20} y^4 - \frac{y^5}{5} \right]_0^1 \\
 &= 24\pi \left(\frac{2}{15} + \frac{3}{20} - \frac{1}{5} \right) = \frac{24\pi}{60} (8 + 9 - 12) = \frac{24\pi}{12} = 2\pi
 \end{aligned}$$

$$\begin{aligned}
 28. \text{ (a)} \quad V &= \int_c^d 2\pi \left(\frac{\text{shell}}{\text{radius}} \right) \left(\frac{\text{shell}}{\text{height}} \right) dy = \int_0^2 2\pi y \left[\frac{y^2}{2} - \left(\frac{y^4}{4} - \frac{y^2}{2} \right) \right] dy = \int_0^2 2\pi y \left(y^2 - \frac{y^4}{4} \right) dy = 2\pi \int_0^2 \left(y^3 - \frac{y^5}{4} \right) dy \\
 &= 2\pi \left[\frac{y^4}{4} - \frac{y^6}{24} \right]_0^2 = 2\pi \left(\frac{2^4}{4} - \frac{2^6}{24} \right) = 32\pi \left(\frac{1}{4} - \frac{1}{6} \right) = 32\pi \left(\frac{1}{6} \right) = \frac{8\pi}{3}
 \end{aligned}$$

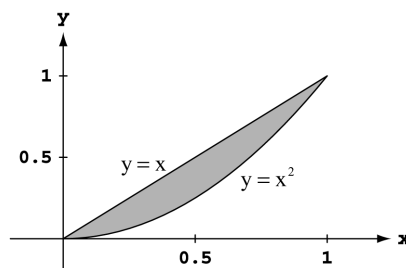
$$\begin{aligned}
 \text{(b)} \quad V &= \int_c^d 2\pi \left(\frac{\text{shell}}{\text{radius}} \right) \left(\frac{\text{shell}}{\text{height}} \right) dy = \int_0^2 2\pi (2-y) \left[\frac{y^2}{2} - \left(\frac{y^4}{4} - \frac{y^2}{2} \right) \right] dy = \int_0^2 2\pi (2-y) \left(y^2 - \frac{y^4}{4} \right) dy \\
 &= 2\pi \int_0^2 \left(2y^2 - \frac{y^4}{2} - y^3 + \frac{y^5}{4} \right) dy = 2\pi \left[\frac{2y^3}{3} - \frac{y^5}{10} - \frac{y^4}{4} + \frac{y^6}{24} \right]_0^2 = 2\pi \left(\frac{16}{3} - \frac{32}{10} - \frac{16}{4} + \frac{64}{24} \right) = \frac{8\pi}{5}
 \end{aligned}$$

$$\begin{aligned}
 \text{(c)} \quad V &= \int_c^d 2\pi \left(\frac{\text{shell}}{\text{radius}} \right) \left(\frac{\text{shell}}{\text{height}} \right) dy = \int_0^2 2\pi (5-y) \left[\frac{y^2}{2} - \left(\frac{y^4}{4} - \frac{y^2}{2} \right) \right] dy = \int_0^2 2\pi (5-y) \left(y^2 - \frac{y^4}{4} \right) dy \\
 &= 2\pi \int_0^2 \left(5y^2 - \frac{5}{4} y^4 - y^3 + \frac{y^5}{4} \right) dy = 2\pi \left[\frac{5y^3}{3} - \frac{5y^5}{20} - \frac{y^4}{4} + \frac{y^6}{24} \right]_0^2 = 2\pi \left(\frac{40}{3} - \frac{160}{20} - \frac{16}{4} + \frac{64}{24} \right) = 8\pi
 \end{aligned}$$

$$\begin{aligned}
 \text{(d)} \quad V &= \int_c^d 2\pi \left(\frac{\text{shell}}{\text{radius}} \right) \left(\frac{\text{shell}}{\text{height}} \right) dy = \int_0^2 2\pi \left(y + \frac{5}{8} \right) \left[\frac{y^2}{2} - \left(\frac{y^4}{4} - \frac{y^2}{2} \right) \right] dy = \int_0^2 2\pi \left(y + \frac{5}{8} \right) \left(y^2 - \frac{y^4}{4} \right) dy \\
 &= 2\pi \int_0^2 \left(y^3 - \frac{y^5}{4} + \frac{5}{8} y^2 - \frac{5}{32} y^4 \right) dy = 2\pi \left[\frac{y^4}{4} - \frac{y^6}{24} + \frac{5y^3}{24} - \frac{5y^5}{160} \right]_0^2 = 2\pi \left(\frac{16}{4} - \frac{64}{24} + \frac{40}{24} - \frac{160}{160} \right) = 4\pi
 \end{aligned}$$

$$\begin{aligned}
 29. (a) \text{ About x-axis: } V &= \int_c^d 2\pi \left(\text{shell radius} \right) \left(\text{shell height} \right) dy \\
 &= \int_0^1 2\pi y (\sqrt{y} - y) dy = 2\pi \int_0^1 (y^{3/2} - y^2) dy \\
 &= 2\pi \left[\frac{2}{5} y^{5/2} - \frac{1}{3} y^3 \right]_0^1 = 2\pi \left(\frac{2}{5} - \frac{1}{3} \right) = \frac{2\pi}{15}
 \end{aligned}$$

$$\begin{aligned}
 \text{About y-axis: } V &= \int_a^b 2\pi \left(\text{shell radius} \right) \left(\text{shell height} \right) dx \\
 &= \int_0^1 2\pi x (x - x^2) dx = 2\pi \int_0^1 (x^2 - x^3) dx \\
 &= 2\pi \left[\frac{x^3}{3} - \frac{x^4}{4} \right]_0^1 = 2\pi \left(\frac{1}{3} - \frac{1}{4} \right) = \frac{\pi}{6}
 \end{aligned}$$

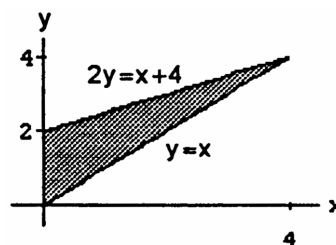


$$\begin{aligned}
 (b) \text{ About x-axis: } R(x) &= x \text{ and } r(x) = x^2 \Rightarrow V = \int_a^b \pi [R(x)^2 - r(x)^2] dx = \int_0^1 \pi [x^2 - x^4] dx \\
 &= \pi \left[\frac{x^3}{3} - \frac{x^5}{5} \right]_0^1 = \pi \left(\frac{1}{3} - \frac{1}{5} \right) = \frac{2\pi}{15}
 \end{aligned}$$

$$\begin{aligned}
 \text{About y-axis: } R(y) &= \sqrt{y} \text{ and } r(y) = y \Rightarrow V = \int_c^d \pi [R(y)^2 - r(y)^2] dy = \int_0^1 \pi [y - y^2] dy \\
 &= \pi \left[\frac{y^2}{2} - \frac{y^3}{3} \right]_0^1 = \pi \left(\frac{1}{2} - \frac{1}{3} \right) = \frac{\pi}{6}
 \end{aligned}$$

$$\begin{aligned}
 30. (a) V &= \int_a^b \pi [R(x)^2 - r(x)^2] dx = \pi \int_0^4 \left[\left(\frac{x}{2} + 2 \right)^2 - x^2 \right] dx \\
 &= \pi \int_0^4 \left(-\frac{3}{4}x^2 + 2x + 4 \right) dx = \pi \left[-\frac{x^3}{4} + x^2 + 4x \right]_0^4 \\
 &= \pi (-16 + 16 + 16) = 16\pi
 \end{aligned}$$

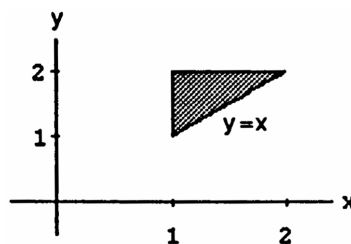
$$\begin{aligned}
 (b) V &= \int_a^b 2\pi \left(\text{shell radius} \right) \left(\text{shell height} \right) dx = \int_0^4 2\pi x \left(\frac{x}{2} + 2 - x \right) dx \\
 &= \int_0^4 2\pi x \left(2 - \frac{x}{2} \right) dx = 2\pi \int_0^4 \left(2x - \frac{x^2}{2} \right) dx \\
 &= 2\pi \left[x^2 - \frac{x^3}{6} \right]_0^4 = 2\pi \left(16 - \frac{64}{6} \right) = \frac{32\pi}{3}
 \end{aligned}$$



$$\begin{aligned}
 (c) V &= \int_a^b 2\pi \left(\text{shell radius} \right) \left(\text{shell height} \right) dx = \int_0^4 2\pi (4-x) \left(\frac{x}{2} + 2 - x \right) dx = \int_0^4 2\pi (4-x) \left(2 - \frac{x}{2} \right) dx = 2\pi \int_0^4 \left(8 - 4x + \frac{x^2}{2} \right) dx \\
 &= 2\pi \left[8x - 2x^2 + \frac{x^3}{6} \right]_0^4 = 2\pi \left(32 - 32 + \frac{64}{6} \right) = \frac{64\pi}{3}
 \end{aligned}$$

$$\begin{aligned}
 (d) V &= \int_a^b \pi [R(x)^2 - r(x)^2] dx = \pi \int_0^4 \left[(8-x)^2 - \left(6 - \frac{x}{2} \right)^2 \right] dx = \pi \int_0^4 \left[(64 - 16x + x^2) - \left(36 - 6x + \frac{x^2}{4} \right) \right] dx \\
 &= \pi \int_0^4 \left(\frac{3}{4}x^2 - 10x + 28 \right) dx = \pi \left[\frac{x^3}{4} - 5x^2 + 28x \right]_0^4 = \pi [16 - (5)(16) + (7)(16)] = \pi (3)(16) = 48\pi
 \end{aligned}$$

$$\begin{aligned}
 31. (a) V &= \int_c^d 2\pi \left(\text{shell radius} \right) \left(\text{shell height} \right) dy = \int_1^2 2\pi y (y - 1) dy \\
 &= 2\pi \int_1^2 (y^2 - y) dy = 2\pi \left[\frac{y^3}{3} - \frac{y^2}{2} \right]_1^2 \\
 &= 2\pi \left[\left(\frac{8}{3} - \frac{4}{2} \right) - \left(\frac{1}{3} - \frac{1}{2} \right) \right] \\
 &= 2\pi \left(\frac{7}{3} - 2 + \frac{1}{2} \right) = \frac{\pi}{3} (14 - 12 + 3) = \frac{5\pi}{3}
 \end{aligned}$$



$$\begin{aligned}
 (b) V &= \int_a^b 2\pi \left(\text{shell radius} \right) \left(\text{shell height} \right) dx = \int_1^2 2\pi x (2 - x) dx = 2\pi \int_1^2 (2x - x^2) dx = 2\pi \left[x^2 - \frac{x^3}{3} \right]_1^2 \\
 &= 2\pi \left[\left(4 - \frac{8}{3} \right) - \left(1 - \frac{1}{3} \right) \right] = 2\pi \left[\left(\frac{12-8}{3} \right) - \left(\frac{3-1}{3} \right) \right] = 2\pi \left(\frac{4}{3} - \frac{2}{3} \right) = \frac{4\pi}{3}
 \end{aligned}$$

$$\begin{aligned}
 (c) V &= \int_a^b 2\pi \left(\text{shell radius} \right) \left(\text{shell height} \right) dx = \int_1^2 2\pi \left(\frac{10}{3} - x \right) (2 - x) dx = 2\pi \int_1^2 \left(\frac{20}{3} - \frac{16}{3}x + x^2 \right) dx \\
 &= 2\pi \left[\frac{20}{3}x - \frac{8}{3}x^2 + \frac{1}{3}x^3 \right]_1^2 = 2\pi \left[\left(\frac{40}{3} - \frac{32}{3} + \frac{8}{3} \right) - \left(\frac{20}{3} - \frac{8}{3} + \frac{1}{3} \right) \right] = 2\pi \left(\frac{3}{3} \right) = 2\pi
 \end{aligned}$$

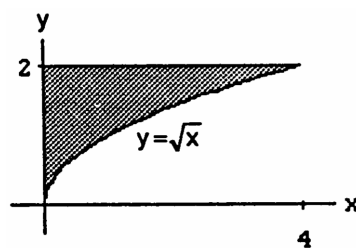
$$\begin{aligned}
 (d) V &= \int_c^d 2\pi \left(\text{shell radius} \right) \left(\text{shell height} \right) dy = \int_1^2 2\pi (y - 1)(y - 1) dy = 2\pi \int_1^2 (y - 1)^2 dy = 2\pi \left[\frac{(y-1)^3}{3} \right]_1^2 = \frac{2\pi}{3}
 \end{aligned}$$

$$\begin{aligned}
 32. (a) \quad V &= \int_c^d 2\pi \left(\text{shell radius} \right) \left(\text{shell height} \right) dy = \int_0^2 2\pi y(y^2 - 0) dy \\
 &= 2\pi \int_0^2 y^3 dy = 2\pi \left[\frac{y^4}{4} \right]_0^2 = 2\pi \left(\frac{2^4}{4} \right) = 8\pi
 \end{aligned}$$

$$\begin{aligned}
 (b) \quad V &= \int_a^b 2\pi \left(\text{shell radius} \right) \left(\text{shell height} \right) dx \\
 &= \int_0^4 2\pi x(2 - \sqrt{x}) dx = 2\pi \int_0^4 (2x - x^{3/2}) dx \\
 &= 2\pi \left[x^2 - \frac{2}{5} x^{5/2} \right]_0^4 = 2\pi \left(16 - \frac{2 \cdot 2^5}{5} \right) \\
 &= 2\pi \left(16 - \frac{64}{5} \right) = \frac{2\pi}{5} (80 - 64) = \frac{32\pi}{5}
 \end{aligned}$$

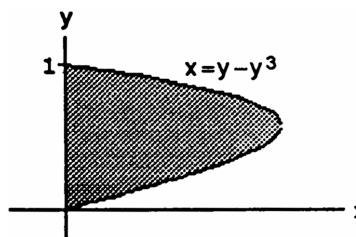
$$\begin{aligned}
 (c) \quad V &= \int_a^b 2\pi \left(\text{shell radius} \right) \left(\text{shell height} \right) dx = \int_0^4 2\pi(4 - x)(2 - \sqrt{x}) dx = 2\pi \int_0^4 (8 - 4x^{1/2} - 2x + x^{3/2}) dx \\
 &= 2\pi \left[8x - \frac{8}{3} x^{3/2} - x^2 + \frac{2}{5} x^{5/2} \right]_0^4 = 2\pi \left(32 - \frac{64}{3} - 16 + \frac{64}{5} \right) = \frac{2\pi}{15} (240 - 320 + 192) = \frac{2\pi}{15} (112) = \frac{224\pi}{15}
 \end{aligned}$$

$$\begin{aligned}
 (d) \quad V &= \int_c^d 2\pi \left(\text{shell radius} \right) \left(\text{shell height} \right) dy = \int_0^2 2\pi(2 - y)(y^2) dy = 2\pi \int_0^2 (2y^2 - y^3) dy = 2\pi \left[\frac{2}{3} y^3 - \frac{y^4}{4} \right]_0^2 \\
 &= 2\pi \left(\frac{16}{3} - \frac{16}{4} \right) = \frac{32\pi}{12} (4 - 3) = \frac{8\pi}{3}
 \end{aligned}$$

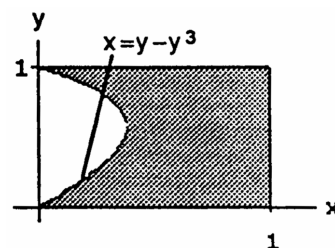


$$\begin{aligned}
 33. (a) \quad V &= \int_c^d 2\pi \left(\text{shell radius} \right) \left(\text{shell height} \right) dy = \int_0^1 2\pi y(y - y^3) dy \\
 &= \int_0^1 2\pi (y^2 - y^4) dy = 2\pi \left[\frac{y^3}{3} - \frac{y^5}{5} \right]_0^1 = 2\pi \left(\frac{1}{3} - \frac{1}{5} \right) \\
 &= \frac{4\pi}{15}
 \end{aligned}$$

$$\begin{aligned}
 (b) \quad V &= \int_c^d 2\pi \left(\text{shell radius} \right) \left(\text{shell height} \right) dy \\
 &= \int_0^1 2\pi(1 - y)(y - y^3) dy \\
 &= 2\pi \int_0^1 (y - y^2 - y^3 + y^4) dy = 2\pi \left[\frac{y^2}{2} - \frac{y^3}{3} - \frac{y^4}{4} + \frac{y^5}{5} \right]_0^1 = 2\pi \left(\frac{1}{2} - \frac{1}{3} - \frac{1}{4} + \frac{1}{5} \right) = \frac{2\pi}{60} (30 - 20 - 15 + 12) = \frac{7\pi}{30}
 \end{aligned}$$



$$\begin{aligned}
 34. (a) \quad V &= \int_c^d 2\pi \left(\text{shell radius} \right) \left(\text{shell height} \right) dy \\
 &= \int_0^1 2\pi y[1 - (y - y^3)] dy \\
 &= 2\pi \int_0^1 (y - y^2 + y^4) dy = 2\pi \left[\frac{y^2}{2} - \frac{y^3}{3} + \frac{y^5}{5} \right]_0^1 \\
 &= 2\pi \left(\frac{1}{2} - \frac{1}{3} + \frac{1}{5} \right) = \frac{2\pi}{30} (15 - 10 + 6) \\
 &= \frac{11\pi}{15}
 \end{aligned}$$



(b) Use the washer method:

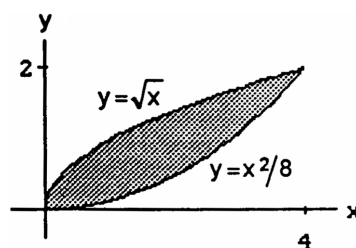
$$\begin{aligned}
 V &= \int_c^d \pi [R^2(y) - r^2(y)] dy = \int_0^1 \pi [1^2 - (y - y^3)^2] dy = \pi \int_0^1 (1 - y^2 - y^6 + 2y^4) dy = \pi \left[y - \frac{y^3}{3} - \frac{y^7}{7} + \frac{2y^5}{5} \right]_0^1 \\
 &= \pi \left(1 - \frac{1}{3} - \frac{1}{7} + \frac{2}{5} \right) = \frac{\pi}{105} (105 - 35 - 15 + 42) = \frac{97\pi}{105}
 \end{aligned}$$

(c) Use the washer method:

$$\begin{aligned}
 V &= \int_c^d \pi [R^2(y) - r^2(y)] dy = \int_0^1 \pi [1^2 - (y - y^3)^2] dy = \pi \int_0^1 [1 - 2(y - y^3) + (y - y^3)^2] dy \\
 &= \pi \int_0^1 (1 + y^2 + y^6 - 2y + 2y^3 - 2y^4) dy = \pi \left[y + \frac{y^3}{3} + \frac{y^7}{7} - y^2 + \frac{y^4}{2} - \frac{2y^5}{5} \right]_0^1 = \pi \left(1 + \frac{1}{3} + \frac{1}{7} - 1 + \frac{1}{2} - \frac{2}{5} \right) \\
 &= \frac{\pi}{210} (70 + 30 + 105 - 2 \cdot 42) = \frac{121\pi}{210}
 \end{aligned}$$

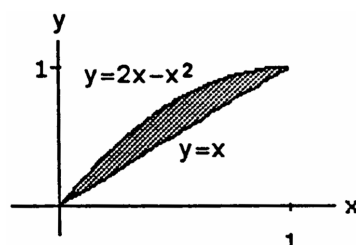
$$\begin{aligned}
 (d) \quad V &= \int_c^d 2\pi \left(\text{shell radius} \right) \left(\text{shell height} \right) dy = \int_0^1 2\pi(1 - y)[1 - (y - y^3)] dy = 2\pi \int_0^1 (1 - y)(1 - y + y^3) dy \\
 &= 2\pi \int_0^1 (1 - y + y^3 - y + y^2 - y^4) dy = 2\pi \int_0^1 (1 - 2y + y^2 + y^3 - y^4) dy = 2\pi \left[y - y^2 + \frac{y^3}{3} + \frac{y^4}{4} - \frac{y^5}{5} \right]_0^1 \\
 &= 2\pi \left(1 - 1 + \frac{1}{3} + \frac{1}{4} - \frac{1}{5} \right) = \frac{2\pi}{60} (20 + 15 - 12) = \frac{23\pi}{30}
 \end{aligned}$$

$$\begin{aligned}
 35. (a) \quad V &= \int_c^d 2\pi \left(\text{shell radius} \right) \left(\text{shell height} \right) dy = \int_0^2 2\pi y (\sqrt{8y} - y^2) dy \\
 &= 2\pi \int_0^2 \left(2\sqrt{2} y^{3/2} - y^3 \right) dy = 2\pi \left[\frac{4\sqrt{2}}{5} y^{5/2} - \frac{y^4}{4} \right]_0^2 \\
 &= 2\pi \left(\frac{4\sqrt{2} \cdot (\sqrt{2})^5}{5} - \frac{2^4}{4} \right) = 2\pi \left(\frac{4 \cdot 2^3}{5} - \frac{4 \cdot 4}{4} \right) \\
 &= 2\pi \cdot 4 \left(\frac{8}{5} - 1 \right) = \frac{8\pi}{5} (8 - 5) = \frac{24\pi}{5}
 \end{aligned}$$



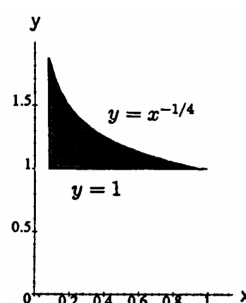
$$\begin{aligned}
 (b) \quad V &= \int_a^b 2\pi \left(\text{shell radius} \right) \left(\text{shell height} \right) dx = \int_0^4 2\pi x \left(\sqrt{x} - \frac{x^2}{8} \right) dx = 2\pi \int_0^4 \left(x^{3/2} - \frac{x^3}{8} \right) dx = 2\pi \left[\frac{2}{5} x^{5/2} - \frac{x^4}{32} \right]_0^4 \\
 &= 2\pi \left(\frac{2 \cdot 2^5}{5} - \frac{4^4}{32} \right) = 2\pi \left(\frac{2^6}{5} - \frac{2^8}{32} \right) = \frac{\pi \cdot 2^7}{160} (32 - 20) = \frac{\pi \cdot 2^9 \cdot 3}{160} = \frac{\pi \cdot 2^4 \cdot 3}{5} = \frac{48\pi}{5}
 \end{aligned}$$

$$\begin{aligned}
 36. (a) \quad V &= \int_a^b 2\pi \left(\text{shell radius} \right) \left(\text{shell height} \right) dx \\
 &= \int_0^1 2\pi x [(2x - x^2) - x] dx \\
 &= 2\pi \int_0^1 x(x - x^2) dx = 2\pi \int_0^1 (x^2 - x^3) dx \\
 &= 2\pi \left[\frac{x^3}{3} - \frac{x^4}{4} \right]_0^1 = 2\pi \left(\frac{1}{3} - \frac{1}{4} \right) = \frac{\pi}{6}
 \end{aligned}$$



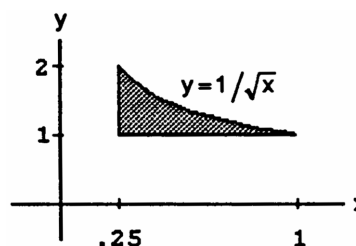
$$\begin{aligned}
 (b) \quad V &= \int_a^b 2\pi \left(\text{shell radius} \right) \left(\text{shell height} \right) dx = \int_0^1 2\pi (1 - x) [(2x - x^2) - x] dx = 2\pi \int_0^1 (1 - x)(x - x^2) dx \\
 &= 2\pi \int_0^1 (x - 2x^2 + x^3) dx = 2\pi \left[\frac{x^2}{2} - \frac{2}{3} x^3 + \frac{x^4}{4} \right]_0^1 = 2\pi \left(\frac{1}{2} - \frac{2}{3} + \frac{1}{4} \right) = \frac{2\pi}{12} (6 - 8 + 3) = \frac{\pi}{6}
 \end{aligned}$$

$$\begin{aligned}
 37. (a) \quad V &= \int_a^b \pi [R^2(x) - r^2(x)] dx = \pi \int_{1/16}^1 (x^{-1/2} - 1) dx \\
 &= \pi [2x^{1/2} - x]_{1/16}^1 = \pi \left[(2 - 1) - \left(2 \cdot \frac{1}{4} - \frac{1}{16} \right) \right] \\
 &= \pi \left(1 - \frac{7}{16} \right) = \frac{9\pi}{16}
 \end{aligned}$$



$$\begin{aligned}
 (b) \quad V &= \int_a^b 2\pi \left(\text{shell radius} \right) \left(\text{shell height} \right) dy = \int_1^2 2\pi y \left(\frac{1}{y^4} - \frac{1}{16} \right) dy \\
 &= 2\pi \int_1^2 \left(y^{-3} - \frac{y}{16} \right) dy = 2\pi \left[-\frac{1}{2} y^{-2} - \frac{y^2}{32} \right]_1^2 \\
 &= 2\pi \left[\left(-\frac{1}{8} - \frac{1}{8} \right) - \left(-\frac{1}{2} - \frac{1}{32} \right) \right] = 2\pi \left(\frac{1}{4} + \frac{1}{32} \right) \\
 &= \frac{2\pi}{32} (8 + 1) = \frac{9\pi}{16}
 \end{aligned}$$

$$\begin{aligned}
 38. (a) \quad V &= \int_c^d \pi [R^2(y) - r^2(y)] dy = \int_1^2 \pi \left(\frac{1}{y^4} - \frac{1}{16} \right) dy \\
 &= \pi \left[-\frac{1}{3} y^{-3} - \frac{y}{16} \right]_1^2 = \pi \left[\left(-\frac{1}{24} - \frac{1}{8} \right) - \left(-\frac{1}{3} - \frac{1}{16} \right) \right] \\
 &= \frac{\pi}{48} (-2 - 6 + 16 + 3) = \frac{11\pi}{48}
 \end{aligned}$$



$$\begin{aligned}
 (b) \quad V &= \int_a^b 2\pi \left(\text{shell radius} \right) \left(\text{shell height} \right) dx = \int_{1/4}^1 2\pi x \left(\frac{1}{\sqrt{x}} - 1 \right) dx \\
 &= 2\pi \int_{1/4}^1 (x^{1/2} - x) dx = 2\pi \left[\frac{2}{3} x^{3/2} - \frac{x^2}{2} \right]_{1/4}^1 \\
 &= 2\pi \left[\left(\frac{2}{3} - \frac{1}{2} \right) - \left(\frac{2}{3} \cdot \frac{1}{8} - \frac{1}{32} \right) \right] = \pi \left(\frac{4}{3} - 1 - \frac{1}{6} + \frac{1}{16} \right) = \frac{\pi}{48} (4 \cdot 16 - 48 - 8 + 3) = \frac{11\pi}{48}
 \end{aligned}$$

$$39. (a) \quad \text{Disk: } V = V_1 - V_2$$

$$\begin{aligned}
 V_1 &= \int_{a_1}^{b_1} \pi [R_1(x)]^2 dx \text{ and } V_2 = \int_{a_2}^{b_2} \pi [R_2(x)]^2 dx \text{ with } R_1(x) = \sqrt{\frac{x+2}{3}} \text{ and } R_2(x) = \sqrt{x}, \\
 a_1 &= -2, b_1 = 1; a_2 = 0, b_2 = 1 \Rightarrow \text{two integrals are required}
 \end{aligned}$$